

Year group: 3

Date:

	Challenge 1	Challenge 2	Challenge 3
English	https://www.bing.com/videos/search?q=rumble+in+the+jungle+interactive+story&adlt=strict&view=detail&mid=363A28C6A3009D2C936C363A28C6A3009D2C936C&&FORM=VDRVRV watch the video link from 2 minutes 45 seconds to 3 minutes 45 seconds and then write a recount of the video using the help sheet to help you.	Can you use the picture to answer the questions in full sentences? Can you draw your own pictures of what you think a dragons home looks like?	Can you use the picture to answer the questions in full sentences? Can you draw your own pictures of what you think a dragons home looks like?
Maths	a) Can you answer questions on the tally charts? b)TTrockstars	a) Can you interpret and answer questions on tables? b)TTrockstars	a) Can you interpret and answer questions on tables? b)TTrockstars
Reading/ Spellings	Can you practise writing out the common exception words in the table and then find them in the word search? Don't worry if you have finished your home links book. Why not have a look at the e books that have been added to this week's folder and get stuck into one of those.	Can you practise writing out the common exception words in the table and then find them in the word search?	Can you practise writing out the common exception words in the table and then find them in the word search?
Other	PE - Let's try Pokémon Yoga ! Who can hold those stretches and positions the longest? https://www.youtube.com/watch?v=tbCjkPIsaes		

Challenge 1 spellings

Spelling	Write	Write	Write
With			
different			
When			
suddenly			
another			
again			

Can you find the spellings from the table above in the word search?

common exception words

C K E Q F W O N Q U
Q Y S U F T B V Z E
Y L N E D D U S A A
W W G J N F J D G N
V U I E U Q H O A O
H Z H T U Q M I I T
M W Y V H Y V J N H
D I F F E R E N T E
O B A P S G T X N R
Q C J Z G U C O H O

Challenge 2 and 3 spellings

Spelling	Write	Write	Write
experience			
knowledge			
separate			
remember			
different			
position			

Can you find the spellings from the table above in the word search?

common exception words

E K N O W L E D G E
X P S Q M H S E C D
P O B E Y F E R I T
E S W C P Q D F J W
R I J Z A A F T T Y
I T X X X E R E S L
E I W N R V T A F Y
N O M E Y C D V T R
C N N E J Z B P Q E
E T R E B M E M E R

Challenge 1 English help sheet

Spellings to help:

Spellings

Elephant giraffe
zebra flying
galloping running
trotting bird grass
clouds dazed drifting
falling

ly words

carefully happily joyfully
slowly quickly curiously

Openers

Just then Suddenly
Next Today
At that moment

because

when

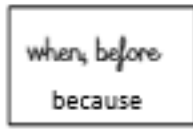
before

after

At that moment, the *bright, red* bird came swooping down towards the elephant *quickly* *because* he was looking for some where to land.

Challenge 1 English – watch the video link from 2 minutes 45 seconds to 3 minutes 45 seconds and then write a recount of the video using the help sheet to help you.

Try to include:









Challenge 2 and 3 English



Question time!

Where are the dragons heading?

What is 'paradise'? Why are they looking forward to it so much?

Are these the only 3 dragons that exist, or are there more?

Where have the dragons come from? Where is their home?

If you had a pet baby dragon, how would you look after it?

Perfect picture!

Can you draw what you think a dragon's home might look like? Think carefully about what dragons are fond of.

Make tally charts

- 1 Draw tally marks to represent each number.
 a) 5 b) 10 c) 4 d) 16



- 2 There are some socks on a washing line.
 The socks are spotty, stripy or plain.



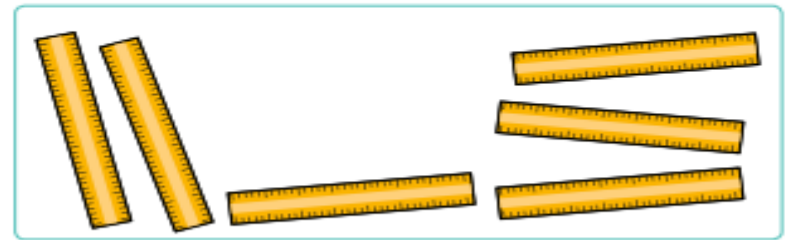
Complete the tally chart.

Sock	Tally
spotty	
stripy	
plain	

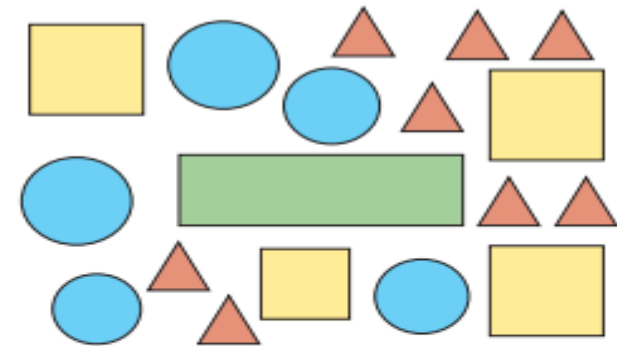
- 3 Class 2 tally the number of pencils, rubbers and rulers they have.

Item	Tally
pencils	IIII
rubbers	HHH IIII
rulers	HHH I

Draw the items. The rulers have been drawn for you.



- 4 Here are some shapes.



- a) Complete a tally chart to show how many of each shape there are.
 b) How did you do the tallying?
 Compare with a partner.

Tally chart grid on next page to help with this question

Challenge 1 Maths continued

Tally chart grid for question 4

Shape	Tally
Circle	
Triangle	
Square	
Rectangle	

Challenge 2 Maths

Tables

- 1 The table shows school attendance for a Year 3 class.
There are 27 children in the class.

Day	Girls	Boys
Monday	15	11
Tuesday	14	12
Wednesday	14	10
Thursday	15	12
Friday	15	11

- a) How many children attended school on Monday?
b) On which day did all the children in the class attend school?
How do you know?
c) How many boys are in the class?
d) How many girls are in the class?
e) Why is there no data for Saturday or Sunday?
f) Who had better attendance – girls or boys?
How did you work it out?
Did your partner do the same?



- 2 The table shows the number of school days in each month.

Month	Number of school days
January	18
February	15
March	19
April	16
May	22
June	20
July	7
August	0
September	18
October	17
November	22
December	16

- a) Which month has the fewest school days? Why?
b) Term 1 is from September to December.
Term 2 is from January to April.
Term 3 is from May to July.
Which term has the most school days?

- 3 The table shows the number of packets of crisps sold in a small shop.

Crisps sold	6:00 – 9:00	9:00 – 12:00	12:00 – 15:00	15:00 – 18:00
Salted	6	19	26	25
Salt and vinegar	0	12	14	7
Paprika	3	9	20	10
Cheese and onion	1	11	14	8



Challenge 2 Maths task 2 continued

The table shows the number of newspapers and magazines sold shop from Monday to Friday.

Day	Number of newspapers	Number of magazines
Monday	126	103
Tuesday	148	113
Wednesday		87
Thursday	150	223
Friday	103	186

- How many newspapers and magazines were sold in total on Tuesday?
- How many more magazines were sold on Thursday than on Wednesday?
- There were 650 newspapers sold in total.
How many newspapers were sold on Wednesday?
- On which day do you think new magazines come out?
Why?

Challenge 3 Maths

Tables

- 2 The table shows the number of school days in each month.

Month	Number of school days
January	18
February	15
March	19
April	16
May	22
June	20
July	7
August	0
September	18
October	17
November	22
December	16

- a) Which month has the fewest school days? Why?
 b) Term 1 is from September to December.
 Term 2 is from January to April.
 Term 3 is from May to July.
 Which term has the most school days?

- 3 The table shows the number of packets of crisps sold in a small shop.

Crisps sold	6:00 – 9:00	9:00 – 12:00	12:00 – 15:00	15:00 – 18:00
Salted	6	19	26	25
Salt and vinegar	0	12	14	7
Paprika	3	9	20	10
Cheese and onion	1	11	14	8



- a) Which flavour of crisp is the most popular?
 b) Which is the least popular flavour?
 c) How many packets of crisps were sold between 6:00 am and 9:00 am?
 d) Between what times were the most salt and vinegar crisps sold?

- 4 The table shows the number of newspapers and magazines sold by a shop from Monday to Friday.

Day	Number of newspapers	Number of magazines
Monday	126	103
Tuesday	148	113
Wednesday		87
Thursday	150	223
Friday	103	186

- a) How many newspapers and magazines were sold in total on Tuesday?
 b) How many more magazines were sold on Thursday than on Wednesday?
 c) There were 650 newspapers sold in total.
 How many newspapers were sold on Wednesday?
 d) On which day do you think new magazines come out?
 Why?

Challenge 3 task 2

This table shows how many times the children went to after school club during the year.



Child	Mon	Tue	Wed	Thu	Fri
Ann	25	30	19	26	34
Hardeep	15	25			
Jaz		4	15	8	
Ben	39	39	39	39	39
Liz			30	19	22

- How many visits to after school club have there been on a Friday?
- Which children have attended after school club on everyday of the week?
- How many times did Liz go to the after school club during the year?
- Which child attended after school club 40 times?



Ann

I think I went to after school club more times on Mondays and Tuesdays than on Thursdays and Fridays.

Do you agree? Explain why.

f)



I think Tuesday is the busiest day.

Hardeep

The most popular day to go to after school club is Thursday.

Liz



Who is right? Use your working out to explain your answer.

g)

Without doing any adding, I can tell that I have attended the after school club more than anyone else.

Ben



Do you agree? Explain your reasoning.

- What other questions could you ask and answer using this table?

