

	<b>Challenge 1</b>	<b>Challenge 2</b>	<b>Challenge 3</b>
<b>English</b>	<p>Can you write a setting description using the image taken from 'The Jungle Book'?</p> <p>Use the help sheet provided.</p>	<p>A) Can you write a range of adjectives using the image from 'The Jungle Book'</p> <p>B) Use the adjectives created to write 3 expanded noun phrases.</p>	<p>A) Can you write a range of adjectives, verbs and prepositions using the image from 'The Jungle Book'</p> <p>B) Use the adjectives created to write 3 expanded noun phrases.</p> <p>c) Write 3 sentences including a verb, adjective and preposition.</p>
<b>Maths</b>	<p>a) Can you subtract 1 digit numbers from 2 digit numbers?</p> <p>b)TTrockstars</p>	<p>a) Can you complete the subtraction word problems using the column method?</p> <p>b)TTrockstars</p>	<p>a) Can you complete the 2 step problems using column addition and subtraction method?</p> <p>b)TTrockstars</p>
<b>Reading/ Spellings</b>	<p>Can you write out the common exception words?</p>	<p>Can you identify the incorrect spellings and spell them correctly? Remember to use your spelling mat inside your yellow book to help you.</p>	<p>Can you identify the incorrect spellings and spell them correctly? Remember to use your spelling mat inside your yellow book to help you.</p>
	<p>Don't worry if you have finished your home links book. Why not have a look at the e books that have been added to this week's folder and get stuck into one of those.</p>		
<b>Other</b>	<p>Computing - Today we are going to look at algorithms or instructions for a computer. God to Education City and help put the algorithms in the correct order.</p>		



# Year 1 & 2 Common Exception Words

This Spot the Mistake with Mr. Whoops pack will cover the words from this statutory spelling

Year 1			Year 2			
a	is	so	after	cold	hour	path
are	love	some	again	could	improve	people
ask	me	the	any	door	kind	plant
be	my	there	bath	even	last	poor
by	no	they	beautiful	every	many	pretty
come	of	to	because	everybody	<u>mind</u>	prove
do	once	today	behind	eye	money	should
friend	one	was	both	fast	most	steak
full	our	we	break	father	move	sugar
go	pull	were	busy	find	<u>Mr</u>	sure
has	push	where	child	floor	<u>Mrs</u>	told
he	put	you	children	gold	old	water
here	said	your	Christmas	grass	only	who
his	says		class	great	<u>parents</u>	whole
house	school		climb	half	pass	wild
I	she		clothes	hold	past	would



## Year 3 and 4 Common Exception Words

<b>Aa</b>	breath	consider	enough	group	island	natural	popular	<b>Rr</b>	surprise
accident	breathe	continue	exercise	guard	<b>Kk</b>	naughty	position	recent	<b>Tt</b>
accidentally	build	<b>Dd</b>	experience	guide	knowledge	notice	possess	regular	therefore
actual	busy	decide	extreme	<b>Hh</b>	<b>Ll</b>	<b>Oo</b>	possession	reign	though
actually	business	describe	<b>Ff</b>	heard	learn	occasion	possible	remember	thought
address	<b>Cc</b>	different	famous	heart	length	occasionally	potatoes	<b>Ss</b>	through
although	calendar	difficult	favourite	height	library	often	pressure	sentence	<b>Vv</b>
answer	caught	disappear	February	history	<b>Mm</b>	opposite	probably	separate	various
appear	centre	<b>Ee</b>	forward	<b>Ii</b>	material	ordinary	promise	special	<b>Ww</b>
arrive	century	early	forwards	imagine	medicine	<b>Pp</b>	purpose	straight	weight
<b>Bb</b>	certain	earth	fruit	increase	mention	particular	<b>Qq</b>	strange	woman
believe	circle	eight	<b>Gg</b>	important	minute	peculiar	quarter	strength	women
bicycle	complete	eighth	grammar	interest	<b>Nn</b>	perhaps	question	suppose	

## Challenge 2 and 3 English

### Year 3/4 Statutory Spelling

# Spot Mr Whoops' Mistakes

Mr Whoops is a little bit clumsy...OK, OK, he's a lot clumsy! Even though he's really trying hard with his writing, he's still accidentally misspelt twelve of his Y3/Y4 key spelling words. Can you spot his mistakes?

Highlight them in the passage of text.

Could you then correct the words at the bottom of the sheet and create a list for Mr. Whoops to practise?



## Activity 1

My favorite day of the week has always been a Sunday. Even as a young boy, I rimembur Sundays being diferent and speshial. Most weeks, I would visit Granny Whoops' house, where we would have roast beef, mashed potatos and Yorkshire puddings. Although she was famos for her huge portions, I would make every last mouthful disapere. One Sunday lunchtime, I accidentilly tripped while carrying my plate. Luckily, Granny corght it but got covered in gravy! From then on, Granny made me promize never to walk around with crockery ever again. She's such an over-cautious womin!

Mr. Whoops needs to practise these words:


## Challenge 1 English help sheet

### Spellings to help:

#### Spellings

branch tree tiger  
elephants tusks bear  
stripes orange dress  
monkey beaks snakes  
leaves wrapped sitting  
long slithery slippery

#### ly words

carefully happily joyfully  
slowly quickly curiously

#### Openers

Just then Suddenly  
Next Today  
At that moment

because

when

before

*At that moment*, the *long, slithery* snake wrapped himself around the tree *because* he wanted to stare down towards the ground *curiously*.

**Challenge 1 English – can you write a setting description using the picture below. Remember to use the help sheet above.**

**Try to include:**



2A



when, before  
because



---

---

---

---

---

---

---

---

---

---



Challenge 2 English – can you look at the picture carefully and write a list of adjectives and then use them to create a range of expanded noun phrases?



### Adjectives

---

---

---

Example – The **bright, stripy** tiger was **sitting happily next to the monkey**.

Can you choose 3 animals and write an expanded noun phrase for each – using the adjectives you have just listed?

---

---

---

---

---

---

**Challenge 3 English – can you look at the picture carefully and write a list of adjectives, verbs and prepositions we could use in our writing.**



**Adjectives**

---

---

---

---

---

---

---

---

---

---

---

---

**verbs**

---

---

---

---

---

---

---

---

---

---

---

---

**prepositions**

---

---

---

---

---

---

---

---

---

---

---

---

**Challenge 3 English continued .....**

**Example – The bright, stripy tiger was sitting happily next to the monkey.**

**Can you choose 3 animals and write an expanded noun phrase for each – using the adjectives you have just listed?**

---

---

---

---

---

---

**Can you write 3 sentences using the picture on the previous page. In each sentence include a preposition, verb and fronted adverbial in each one?**

---

---

---

---

---

---

---

---

---

---

---

---


**Challenge 1 Maths – can you subtract a 1-digit number from a 2-digit number?**



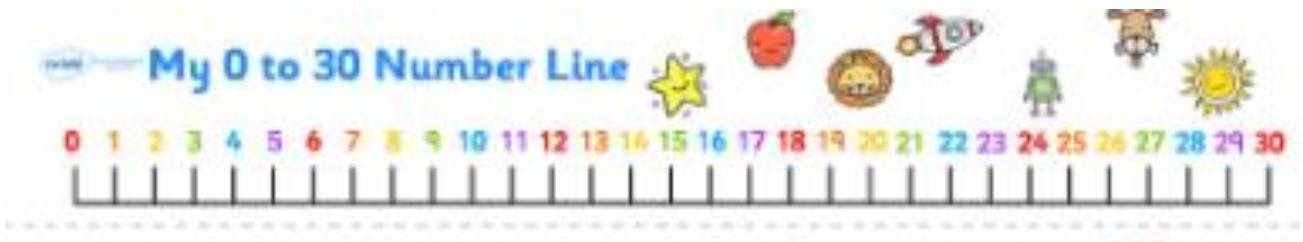
Work out the subtractions.

- a)  $14 - 9$       c)  $17 - 8$       e)  $15 - 9$   
 b)  $14 - 8$       d)  $15 - 7$       f)  $12 - 3$

What is the difference between the numbers?



How did you find the difference?



**Work out these subtractions:**

- $21 - 5 =$                        $16 - 8 =$                        $25 - 7 =$   
 $15 - 9 =$                        $30 - 11 =$                        $23 - 7 =$


**How many different subtractions can you make using only these numbers?**

5    8    2    6    3    4


**Challenge 2 Maths**

**Subtract these numbers together using column subtraction (remember to start with the ones column).**


**Jack and James had collected 741 marbles but decided to give their cousin Emily 267. How many marbles will they have left?**

A 20x10 grid for column subtraction.

**Emily and her 3 friends had 721 packs of pencils, they took 245 into school and left the rest at home. How many packs of pencils did they have left at home?**

A 20x10 grid for column subtraction.

**Ben, Tom and Harry had 342 felt tip pens but lost 187. How many did they have left?**

A 20x10 grid for column subtraction.

## Challenge 2 task 2

---

Challenge: Complete the following calculations:

$\begin{array}{r} 73\_ \\ - 4\_7 \\ \hline \_81 \\ \hline \end{array}$	$\begin{array}{r} \_70 \\ - 29\_ \\ \hline 1\_6 \\ \hline \end{array}$	$\begin{array}{r} \_01 \\ - 4\_8 \\ \hline 33\_ \\ \hline \end{array}$
--	--	--

### Challenge 3 Maths

1. A shop has 376 pairs of socks. 87 pairs are white sport socks and 123 are white trainer socks. How many other pairs are there?




---

2. There are 289 children in a school. 154 are in Key Stage 2 and 76 are in Key Stage 1. The rest are in the Foundation Stage. How many children are in the Foundation Stage?

---

3. There are 415 pencils in the school store cupboard. 175 are given out to Key Stage 2 and 132 to Key Stage 1. How many are left in the store cupboard?



---

4. Edward buys a drink for 67p and 2 packets of crisps for £1.18. He pays with a £2 coin. What change does he receive?

---

5. A flower market has 682 tulips. One florist buys 255 tulips and another 208 tulips. How many are left?

---

6. A sweet shop has 591 boiled sweets in jars. One jar containing 164 sweets and another containing 153 are sold. How many are left?



---

7. A farmer has 609 cows. He takes 246 to a new field and 176 to a shed. How many are left behind?

---

### Challenge 3 Maths task 2

Can you create 10 subtraction calculations using these digit cards:

2

4

5

9

7

Example:  $54 - 29$