

	<b>Challenge 1</b>	<b>Challenge 2</b>	<b>Challenge 3</b>
<b>English</b>	<p>Can you read the text on 'The Lost Teddy' and answer the questions?</p> <p>Remember to highlight key information.</p>	<p>Can you read the text on 'Captain Tom Moore' and answer the questions?</p> <p>Remember to highlight key information.</p>	<p>Can you read the text on 'Captain Tom Moore' and answer the questions?</p> <p>Remember to highlight key information.</p>
<b>Maths</b>	<p>a) Can you complete the multiplication questions on x10.</p> <p>b)TTrockstars</p>	<p>a) Can you read each question carefully and complete the multiplication using the grid method? Use the help sheet if you're unsure.</p> <p>b)TTrockstars</p>	<p>a) Can you complete a range of questions on the 6 times tables?</p> <p>b)TTrockstars</p>
<b>Reading/ Spellings</b>	<p>Can you identify the incorrect spellings and spell them correctly? Remember to use your spelling mat inside your yellow book to help you.</p>	<p>Can you identify the incorrect spellings and spell them correctly? Remember to use your spelling mat inside your yellow book to help you.</p>	<p>Can you identify the incorrect spellings and spell them correctly? Remember to use your spelling mat inside your yellow book to help you.</p>
	<p>Don't worry if you have finished your home links book. Why not have a look at the e books that have been added to this week's folder and get stuck into one of those.</p>		
<b>Other</b>	<p>Sports week day 4 - Let's play the floor is lava!</p> <p>Please be safe when you are doing this and don't break anything. Indoors or outdoors when someone calls lava you need to get off the floor SAFELY. Who will be the quickest to get off the floor and who can think the most creatively. Have fun with it!</p>		

# Year 1 & 2 Common Exception Words

This Spot the Mistake with Mr. Whoops pack will cover the words from this statutory spelling

Year 1			Year 2			
a	is	so	after	cold	hour	path
are	love	some	again	could	improve	people
ask	me	the	any	door	kind	plant
be	my	there	bath	even	last	poor
by	no	they	beautiful	every	many	pretty
come	of	to	because	everybody	<u>mind</u>	prove
do	once	today	behind	eye	money	should
friend	one	was	both	fast	most	steak
full	our	we	break	father	move	sugar
go	pull	were	busy	find	<u>Mr</u>	sure
has	push	where	child	floor	<u>Mrs</u>	told
he	put	you	children	gold	old	water
here	said	your	Christmas	grass	only	who
his	says		class	great	<u>parents</u>	whole
house	school		climb	half	pass	wild
I	she		clothes	hold	past	would



## Year 3 and 4 Common Exception Words

<b>Aa</b>	breath	consider	enough	group	island	natural	popular	<b>Rr</b>	surprise
accident	breathe	continue	exercise	guard	<b>Kk</b>	naughty	position	recent	<b>Tt</b>
accidentally	build	<b>Dd</b>	experience	guide	knowledge	notice	possess	regular	therefore
actual	busy	decide	extreme	<b>Hh</b>	<b>Ll</b>	<b>Oo</b>	possession	reign	though
actually	business	describe	<b>Ff</b>	heard	learn	occasion	possible	remember	thought
address	<b>Cc</b>	different	famous	heart	length	occasionally	potatoes	<b>Ss</b>	through
although	calendar	difficult	favourite	height	library	often	pressure	sentence	<b>Vv</b>
answer	caught	disappear	February	history	<b>Mm</b>	opposite	probably	separate	various
appear	centre	<b>Ee</b>	forward	<b>Ii</b>	material	ordinary	promise	special	<b>Ww</b>
arrive	century	early	forwards	imagine	medicine	<b>Pp</b>	purpose	straight	weight
<b>Bb</b>	certain	earth	fruit	increase	mention	particular	<b>Qq</b>	strange	woman
believe	circle	eight	<b>Gg</b>	important	minute	peculiar	quarter	strength	women
bicycle	complete	eighth	grammar	interest	<b>Nn</b>	perhaps	question	suppose	

## Challenge 2 and 3 spellings

Mr Whoops is a little bit clumsy...OK, OK, he's a lot clumsy! Even though he's really trying hard with his writing, he's still accidentally misspelt twelve of his Y3/Y4 key spelling words. Can you spot his mistakes?

Highlight them in the passage of text.

Could you then correct the words at the bottom of the sheet and create a list for Mr. Whoops to practise?



### Activity 9

Dear Diary,

Well today was far from a reguler day... I went to London with the sole purpoze of seeing The Queen. Her Majesty is one of the most famous womin in the world. Today was the great Trooping The Colour parade where the raign of Her Majesty is celebrated as well as her official birthday. Purhaps every person in London was there, or at least it felt like it with all the crowds and cheering. It was dificult to see and hear when the gards marched past and the noise began to increese even more when the crowd caught sight of The Queen herself. Varyous flowers were thrown onto her carriage and she offten waved at the onlookers. When she smiled directly at me, I can't discribe the feeling that came over me - it took my breth away.

What a memorable day!


# The Forgotten Teddy

On a shelf high up in a bedroom, was a teddy. A brown teddy, with a red ribbon around his neck. Once, this teddy had been the most loved toy in the room and the little boy who owned him had played with him every day. But now he sat high up on a shelf gathering dust.



Each day, Teddy would watch as Harry, his owner, would come home from college and flop onto his bed. Each day he hoped that today was the day Harry got him down to play, but Harry never did. Then, one day, Teddy found himself in a bag being put in the loft.

. What does 'gathering dust' mean?

**The teddy has never been washed.**

**The teddy has not moved from the shelf for a very long time.**

**The teddy likes playing in the dust.**

.....

D. Why do you think Harry doesn't want to play with Teddy anymore?

---

.....

1. Where was Teddy put after he was put into the bag?

## Challenge 1 English continued ..... (page 2 of 2)

It was dark and cold in the loft. Teddy was surrounded by boxes full of old photographs and books, but there was no one for him to talk to. All alone, Teddy sat and thought of all the fun he and Harry used to have. He remembered the battles that he and Harry fought against the evil T-rex and the picnics in the garden on hot summer days.



. What was it like in the loft?

---

.....

. What kind of things did Harry and Teddy do?

---

.....

. How do you think Teddy was feeling when he was in the loft? Tick **one** box.

happy

tired

lonely

excited

Eventually, Teddy forgot about Harry. He had been in the loft, in the dark alone, for many years. One day, Teddy heard a noise. He squinted through a hole in the bag and saw that a tall man was climbing up into the loft. 'My bag of special things is here somewhere,' Teddy heard the man say. Teddy looked through the hole at the man. He thought he knew him, but couldn't be sure. Soon the man saw the bag Teddy was in. 'Here it is!' the man exclaimed and he picked up the bag and carried it out of the loft and down the ladder.

Why did Teddy forget about Harry? Tick **one** box.

Because he had got old.

Because he had been alone  
in the loft for so long.

Because he was sad.


# Captain Tom Moore

Captain Tom Moore is the ex-soldier who made headlines around the world in April 2020, when he set out to raise money for the National Health Service, by walking 100 laps around his garden. Not only did he raise an incredible amount of money, but he also broke several world records at the same time.

## Who is Captain Tom Moore?

Captain Tom was born in Yorkshire on 30<sup>th</sup> April 1920. He was a soldier in the British Army and served in the Second World War. He currently lives in Bedfordshire with one of his two daughters and her family.

Captain Tom saw the hard work the hospital staff were doing, when he watched the news during the COVID-19 crisis. Because of this and because he had been well looked after in hospital himself, he decided that he wanted to do something to raise money for the National Health Service (NHS).



## Why 100?

Captain Tom began his challenge as a 99 year old. He decided to walk 100 laps of his garden (10 each day), leading up to his 100<sup>th</sup> birthday, which was on 30<sup>th</sup> April 2020. He set himself a target of £1000, which he reached in a day. Captain Tom completed his laps with the aid of a walking frame.



By the time he finished the 100 laps, he had raised over 27 million pounds!

## Breaking Records

With his story shared around the world, more and more people donated money and Captain Tom broke several records during his fundraising efforts.

He has raised more money from a charity walk than any other single person. He released a charity song, which became the highest selling single of 2020. Six days before his 100<sup>th</sup> birthday, his single went to number 1 in the charts. He is the oldest person ever to have a number one single.



## Challenge 2 English continued ....

---

### Did You Know...?



Captain Tom completed his 100 laps two weeks before his birthday, so decided to increase the number of laps he walked to 200.

Over 125,000 people have been inspired by his story and have sent him birthday cards.

## Challenge 2 English continued ....

# Captain Tom Moore Questions

1. How many laps of his garden did Captain Tom plan to walk before his birthday? Tick **one**.

- 100
- 200
- 1000
- 30

2. Draw lines to show when the events happened.

Captain Tom began his challenge.	1 <sup>st</sup>
Captain Tom released a single.	3 <sup>rd</sup>
Captain Tom finished his 100 laps.	4 <sup>th</sup>
Captain Tom celebrated his 100 <sup>th</sup> birthday.	2 <sup>nd</sup>

3. How would you describe Captain Tom? Tick **two**.

- Determined
- Charitable
- Friendly
- Shy

4. Write **True** or **False** for each statement.

Captain Tom wanted to raise £1000.	
Tom Jones released a single with Captain Tom.	
Captain Tom raised money for the NHS.	
Captain Tom used to be a soldier.	

## Challenge 2 English continued ....

### Captain Tom Moore Questions

5. Find and copy one word that means amazing.

---

6. What does NHS stand for?

---

7. How do you think Captain Tom felt when he realised how much money he had raised? Explain your answer.

---

---

## Challenge 3 English

# Captain Tom Moore

Captain Tom Moore is the **veteran** who made headlines around the world in April 2020, when he set out to raise money for the National Health Service, by walking 100 laps around his garden. Not only did he raise an incredible amount of money, but he also broke several world records at the same time.

### Who is Captain Tom Moore?

Captain Tom was born in Yorkshire on 30<sup>th</sup> April 1920. He was a soldier in the British Army and served in the Second World War. He currently lives in Bedfordshire with one of his two daughters and her family.

Captain Tom saw the hard work the hospital staff were doing, when he watched the news during the COVID-19 crisis. He had been well looked after in hospital himself, after a hip operation several years ago and he decided that he wanted to do something to raise money for the National Health Service (NHS).

### Why 100?

Captain Tom began his challenge as a 99 year old. He decided to walk 100 laps of his garden (10 each day), leading up to his 100<sup>th</sup> birthday, which was on 30<sup>th</sup> April 2020. He set himself a target of £1000, which he reached in a day.



Captain Tom completed his laps with the aid of a walking frame. By the time he finished, he had raised over 27 million pounds!

### Breaking Records

With his story being shared around the world, more and more people donated money and Captain Tom broke several records during his fundraising efforts.




## Challenge 3 English continued ....

### Captain Tom Moore

He has raised more money from a charity walk than any other single person. He released a charity song, with singer Michael Ball and the NHS Voices of Care Choir, which became the highest selling single of 2020 in the UK. Six days before his 100<sup>th</sup> birthday, his single went to number 1 in the charts. He is the oldest person ever to have a number one single.

#### Did You Know...?



- Captain Tom completed his 100 laps two weeks before his birthday, so decided to increase the number of laps he walked to 200.
- The Royal Mail stamped every item posted during the week of his 100<sup>th</sup> birthday, with a special postmark with a message for Captain Tom.
- People have been inspired by his story and have sent him birthday cards. He had so many cards, they had to be stored in the local school hall.
- Captain Tom completed his laps, while wearing his three army medals.

#### Glossary

<b>veteran</b>	An ex-member of the armed forces.
----------------	-----------------------------------

## Challenge 3 English continued ....

# Captain Tom Moore Questions

1. What does NHS stand for? Tick **one**.

- New Hospital Staff
- National Health Service
- National Hospital Staff
- Nurses & Health Staff

2. Draw lines to show when the events happened.

Captain Tom began his challenge.	1 <sup>st</sup>
Captain Tom released a single.	3 <sup>rd</sup>
Captain Tom finished his 100 laps.	4 <sup>th</sup>
Captain Tom celebrated his 100 <sup>th</sup> birthday.	2 <sup>nd</sup>

3. How do you think Captain Tom felt when he heard how much money he had raised? Tick **two**.

- Sad
- Amazed
- Disappointed
- Humbled

4. Write **True** or **False** for each statement.

Captain Tom wanted to raise £1000.	
Tom Jones released a single with Captain Tom.	
Captain Tom raised money for the NHS.	
Captain Tom used to be a sailor.	

## Challenge 3 English continued .....

### Captain Tom Moore Questions

5. Read the paragraph 'Why 100?' **Find** and **copy** one word that means the same as help.

---

6. Fill in the missing words.

He is the \_\_\_\_\_ person ever to have a number one \_\_\_\_\_.

7. Why do you think Captain Tom wanted to raise money for the NHS?

---

---

8. Describe Captain Tom in two words and explain your choices.

---

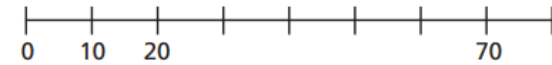
---

## Challenge 1 Maths

How many cookies are there?



a) Complete the number line.



b) Which times-table does the number line show?

10 times-table    5 times-table    1 times-table

How do you know?

Complete the number sentences.

a)  $2 \times 10 = \square$

f)  $\square = 10 \times 10$

b)  $\square = 7 \times 10$

g)  $10 \times \square = 10$

c)  $10 \times 4 = \square$

h)  $10 \times 0 = \square$

d)  $10 \times \square = 110$

i)  $30 = 10 \times \square$

e)  $80 = \square \times 10$

j)  $\square \times 10 = 90$

Eva is 7 years old.

Her gran is 10 times older.

How old is Eva's gran?

Sam is 4 years old.

His aunt is 10 times older.

How old is Sam's aunt?



## Maths challenge 2 help sheet

### Multiplying using the grid method

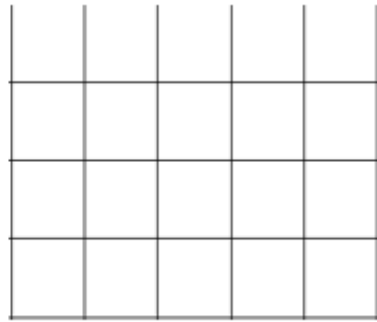
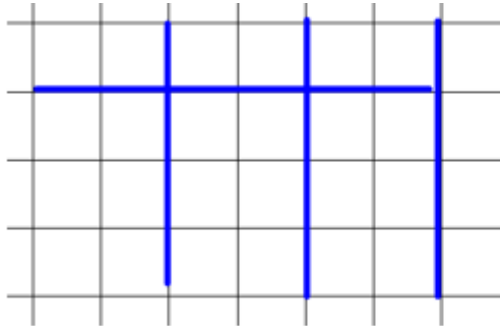
		16	X	3								
		X		10		6				Step 1 Draw grid		
		3		30		18				Step 2 Partition		
										Step 3 Multiply		
										Step 4 Add together		
										3	0	
										1	8	
										4	8	

30  
18  
---  
48

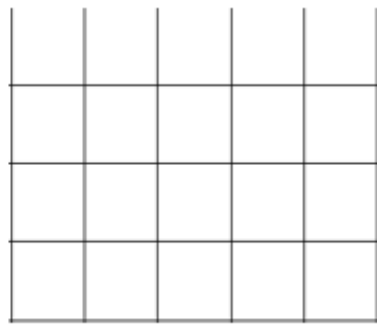
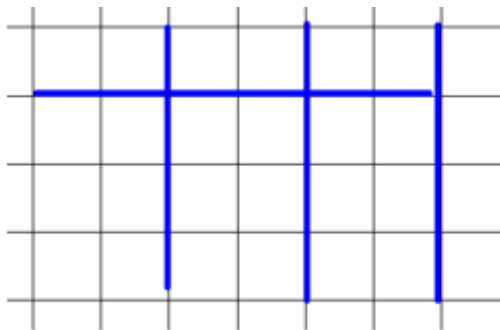
At

### Challenge 2 Maths


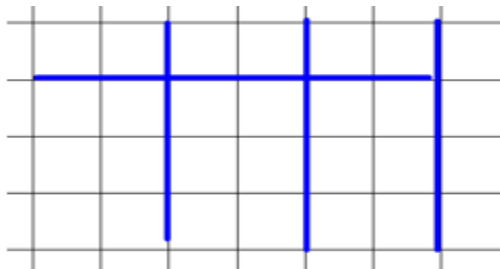
Sam has 4 packs of pencils. Each pack contains 24 pencils. How many pencils does Sam have altogether?



4 friends each have £19 to spend on their day trip. How much money have they got between?



Emily has 4 bags of teddies. Each bag contains 24 teddies. How many teddies does she have altogether?



**Challenge 2 Maths continued .....**

**Can you explain what you notice between these multiplications. Look carefully at the highlighted numbers?**

$$12 \times 2 = 24$$

$$12 \times 4 = 48$$

$$12 \times 8 = 96$$

## Challenge 3 Maths



Write two multiplications and two divisions shown by the array.

---



---



---



---

Fill in the gaps.

**3 times-table**

$0 \times 3 = \square$

$1 \times 3 = 3$

$2 \times 3 = 6$

$3 \times 3 = 9$

$4 \times 3 = \square$

$5 \times 3 = \square$

$6 \times 3 = 18$

**6 times-table**

$0 \times 6 = \square$

$1 \times 6 = \square$

$2 \times 6 = 12$

$3 \times 6 = \square$

$4 \times 6 = 24$

$5 \times 6 = \square$

$6 \times 6 = \square$

Can you explain the relationship between the 3 and 6 times tables?

---



---



---

Colour the multiples of 6

1	2	3	4	5	6	7	8	9	10
11	12	13	14	15	16	17	18	19	20
21	22	23	24	25	26	27	28	29	30
31	32	33	34	35	36	37	38	39	40
41	42	43	44	45	46	47	48	49	50
51	52	53	54	55	56	57	58	59	60
61	62	63	64	65	66	67	68	69	70
71	72	73	74	75	76	77	78	79	80

Complete the number tracks.

30	36				60	66	
----	----	--	--	--	----	----	--

36	30	24				
----	----	----	--	--	--	--

Complete the calculations.

a)  $3 \times 6 = \square$

e)  $11 \times 6 = \square$

b)  $2 \times \square = 12$

f)  $\square \times 6 = 30$

c)  $6 \times 4 = \square$

g)  $6 \times 6 = \square$

### Challenge 3 task 2 Maths

**Jack has an answer of 24. Can you think of as many ways of possible to make 24 when I multiply 2 number together?**

**Example:  $1 \times 24 = 24$**