

Please find today's learning tasks below.

The table below explains the tasks and you will find the resources underneath. Your child will know which challenge they usually access in each subject and which task will be appropriate for them.







Unless otherwise specified, please complete the tasks in either your Home Learning book or on a word document.

Year group: 4		Date: 24/6/20	
	Challenge 1	Challenge 2	Challenge 3
English	<p>Watch the video below to understand what synonyms and antonyms are and recognise the difference between them https://www.bbc.co.uk/bitesize/topics/zfk7ty/articles/z8t8pbk</p> <p>Then complete the synonym and antonym sheet below by colour coding the strawberries</p>	<p>Watch the video below to understand what synonyms and antonyms are and recognise the difference between them https://www.bbc.co.uk/bitesize/topics/zfkk7ty/articles/z8t8pbk</p> <p>Then complete the two worksheets below</p>	<p>Watch the video below to understand what synonyms and antonyms are and recognise the difference between them https://www.bbc.co.uk/bitesize/topics/zfkk7ty/articles/z8t8pbk</p> <p>Then complete the two worksheets below</p>
Maths	<p>Money Order the amounts below from the smallest value to the largest value.</p>	<p>Money Order the amounts below from the smallest value to the largest value.</p>	<p>Money Solve the problems below by ordering amounts of money</p>
Reading	Please read a book or an ebook (https://www.oxfordowl.co.uk/) of your choice		
Topic	<p><i>For the next few topic activities, you will be given 'Year 4 Leavers' activities. Please send this work to your class teacher and make sure it is your best work as it will be used for something very special. All will be revealed soon...</i></p> <p>Please write a few lines about your proudest achievements at school. This could be from any year at Kingsfield. Make sure you include what your proudest achievement is and why it is your proudest achievement.</p>		

English – Challenge 1

Strawberry Synonyms and Antonyms

Colour the synonyms 'ripe' red. Colour the antonyms 'unripe' green.



English – Challenge 2

Synonyms and Antonyms



Name: Date:

Look at the words in the middle and then think of a synonym and an antonym of it and write it down. Example:

Synonym	Word	Antonym
scorching	hot	cold
	over	
	buy	
	man	
	wrong	
	before	
	same	

English – Challenge 2 (continued)

Synonyms and Antonyms

Find one synonym and one antonym from the word bank for each word listed below and write it in the space provided.

Review

Synonym: a word that has the same or similar meaning as another word.

Antonym: a word that has the opposite meaning of another word.

Word Bank

sad	tough	alert	easy
spooky	delicate	huge	end
soft	slow	first	calming
small	bumpy	joyful	
drowsy	difficult	fast	

Word	Synonym	Antonym
big		
beginning		
happy		
quick		
simple		
rough		
sleepy		
strong		
scary		

English – Challenge 3

Synonyms

Can you find **synonyms** for the **bold** words in this extract? Write them in the boxes.
If you can't think of a synonym, use a thesaurus to help you.

Chapter One

Far Too Young to be a Hero

Death was coming. It would fall from the skies like a **hail** of **deadly** meteors – not dropped by
some **malevolent** force from outer space, but **spawned** from the iron bellies of Hitler's **deadly**
Luftwaffe bombers.

Sirens wailed their nightly warning, conducting a drumbeat of **frightened** feet across the
pavements of London's East End. **Streams** of **panicked** citizens **spewed** through the **narrow**
streets; children **screamed** their resistance as mothers and fathers **hauled** them through **jostling**
crowds. Wardens **barked** orders and pointed instructions at the hordes, but few people paid
any attention. They were too **fearful** of the fire and **fury** that was roaring over the English
Channel towards them. **Terror** had already turned **pretty, young** faces into **ugly** balls of fear,
and the eyes of thousands turned constantly upwards, pulled wide and white by dread.



English – Challenge 3 (continued)

Application Activity

I can identify and suggest synonyms or antonyms for given words.

1. Read the text and replace the underlined words with either a suitable synonym or antonym.

“Excuse me waiter but this soup is excellent!” Harvey snorted. The waiter re-arranged his face into a smile and turned to regard the delightful Harvey, who was smirking cockily at his friends.

“I can assure you, young man, that the soup is quite stale,” he said calmly.

“Perhaps,” Harvey grinned. “But it still tastes divine!”
With a smile the waiter scooped up the bowl of soup and placed it on his silver tray.

“I shall replace it at once,” he said through clenched teeth. When he had gone Harvey leant back in his chair feeling smug.

“Told you I’d get another bowl,” he laughed. “This is possibly the worst soup I’ve ever tasted.”

Harvey’s friends shifted around happily in their seats feeling very embarrassed about Harvey’s behaviour.

Maths – Challenge 1

1) £0.30	976p	£5.25	761p	64p
2) £7.08	789p	412p	£3.75	94p
3) 7p	943p	£10.72	890p	£13.78
4) 7890p	455p	£5.00	£78.02	18p
5) 4p	£7.36	439p	6794p	£68.00
6) 783p	£10.04	6700p	£56.32	8905p

Maths – Challenge 2

1) £0.04	7849p	£5.25	819p	432p
2) £42.67	7089p	3280p	£83.75	4719p
3) 7341p	9443p	£130.72	8490p	£839.78

Josh, Marta and Vlad are buying toys.

I have £5.43



Josh



Marta

I have 534p

I have more money than Marta but less than Josh.



Vlad

How much money could Vlad have?
Explain your answer.

What would you rather have, five 50p coins or twelve 20p coins?
Explain your answer fully.



Jamal has these digits cards.



He makes a total that is more than three pounds but less than six pounds.

How many prices can he make?

Can you order your prices in ascending or descending order?

Maths – Challenge 3

4a. Angela has been saving 50p coins. She has more than 2,350p but less than £28.00.



How much could Angela have?



PS

4b. Robert has been saving 50p coins. He has more than £22.50 but less than 2,550p.

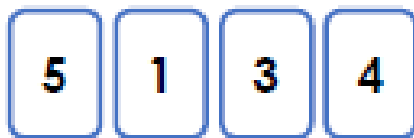


How much could Robert have?



PS

5a. How many ways can you make this statement true? Use the digit cards below.



$$5,40p > 4 \cdot \square \square$$



PS

5b. How many ways can you make this statement true? Use the digit cards below.



$$£4.70 < \square \cdot 4 \square$$



PS

6a. Who has the most money? Explain why.



Wayne

I have four 50p coins.

I have five 20p coins.



John



R

6b. Who has the most money? Explain why.



Molly

I have two £2 coins.

I have three £1 coins.



Mandy



R

Maths – Challenge 3 (continued)

7a. Laura has been saving 50p and 10p coins. She has more than £15.60 but less than £16.20.



How much could Laura have?



PS

7b. Callum has been saving 50p and 10p coins. He has more than £25.90 but less than £26.30.

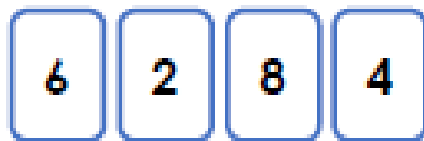


How much could Callum have?



PS

8a. How many ways can you make this statement true? Use the digit cards below.



$$£6.48 > \square \cdot \square \square$$



PS

8b. How many ways can you make this statement true? Use the digit cards below.



$$£5.49 < \square \cdot \square \square$$



PS

9a. Who has the most money? Explain why.



Sophie

I have one £10 note and one 50p coin.

I have one £10 note and three 20p coins.



Kath



PS

9b. Who has the most money? Explain why.



Olly

I have one £5 note and four 50p coins.

I have one £5 note and nine 20p coins.



Annie



PS