

Year group: 3

Date:

	Challenge 1	Challenge 2	Challenge 3
English	Can you write a character description of the cow boy or cow girl you drew?	Can you draw a picture of a cow boy or cow girl and write adjectives and verbs for your picture?	Can you draw a picture of a cow boy or cow girl and write adjectives, verbs and emotion words for your picture?
Maths	a) Can you add the 2 digit and ones? b)TTrockstars	a) Can you subtract the two 3-digit numbers using the column method crossing into the tens and hundreds column? b)TTrockstars	a) Can you answer the worded questions to subtract the two 3-digit numbers using the column method crossing into the tens and hundreds column? b)TTrockstars
Reading/ Spellings	Can you write out the common exception words?	Can you identify the incorrect spellings and spell them correctly? Remember to use your spelling mat inside your yellow book to help you.	Can you identify the incorrect spellings and spell them correctly? Remember to use your spelling mat inside your yellow book to help you.
	Don't worry if you have finished your home links book. Why not have a look at the e books that have been added to this week's folder and get stuck into one of those.		
Other	French - Let's remember how to say our pets in French. Watch the video and with each new pet listen and repeat with the video three times. Now have a go at the word search below, can you remember which pet means what? https://www.youtube.com/watch?v=qJIGw_rsTD8		

Challenge 1 spellings

Look and say	Look, say and write	Cover and write	Check and write again
door			
floor			
poor			
because			
find			

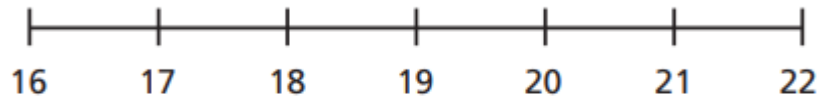
Find the words in this word search.

1. door 2. floor 3. poor 4. because 5. find

h	d	p	o	p	k	x	d	f
g	p	p	o	o	r	g	h	l
s	s	j	q	i	k	l	q	o
b	e	c	a	u	s	e	z	o
g	f	b	z	d	w	j	x	r
p	i	k	v	o	z	r	y	p
g	n	o	z	o	e	r	g	t
y	d	o	l	r	r	x	c	z
h	n	v	h	u	x	h	q	g

Challenge 1 Maths

- a) Use the number line to help you work out the additions.

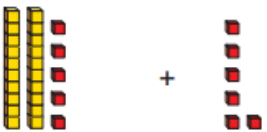
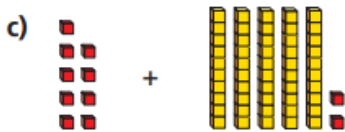

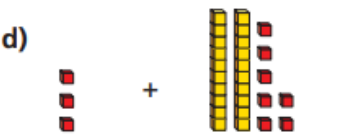


$16 + 1$	$16 + 3$	$16 + 5$
$16 + 2$	$16 + 4$	$16 + 6$

- b) Work out $16 + 7$

Talk to a partner about how you did it.

Work out the additions.

a) 	c) 
b) 	d) 

Work out the additions.

a) $14 + 9$	c) $19 + 6$	e) $4 + 19$
b) $18 + 4$	d) $7 + 15$	f) $18 + 3$

Which two representations show 10?



What is the same about the two representations?
What is different?


Work out the additions.

a) $25 + 6$
b) $38 + 4$
c) $9 + 52$
d) $3 + 27$


Challenge 2 Maths

Subtract these numbers together using column subtraction (remember to start with the ones column).


$961 - 483$



$843 - 265$




$984 - 295$



Challenge 2 task 2

True or false $875 - 796 = 179$ (show your workings below)




Challenge 3 Maths

Subtract these numbers together using column subtraction (remember to start with the ones column).

Jack and James had collected 741 marbles but decided to give their cousin Emily 267. How many marbles will they have left?



Emily and her 3 friends had 721 packs of pencils, they took 245 into school and left the rest at home. How many packs of pencils did they have left at home?



Ben, Tom and Harry had 342 felt tip pens but lost 187. How many did they have left?



Challenge 3 task 2

Challenge: Complete the following calculations:

$\begin{array}{r} 73_ \\ - 4_7 \\ \hline _81 \end{array}$	$\begin{array}{r} _70 \\ - 29_ \\ \hline 1_6 \end{array}$	$\begin{array}{r} _01 \\ - 4_8 \\ \hline 33_ \end{array}$
--------------------------------------------------------------	--------------------------------------------------------------	--------------------------------------------------------------

Pets

a n i u o m a r r f t e
t y u r e t u c h a t o
u y e c h i e n c n h i
s s e r p e n t p i k a
c h t e i n k l u m p i
e s o u r i s k l a l g
r s r o j d h u a l p z
f d t k h r u i p w o s
g e u f e e y o i e u e
h t e e q a t r n r y w
u f v w h a m s t e r t
y a c q v b n u t r e q

chat
chien
lapin
souris

tortue
hamster
serpent
animal



