



Learning Lions

Please find today's learning tasks below.

The table below explains the tasks and you will find the resources underneath.

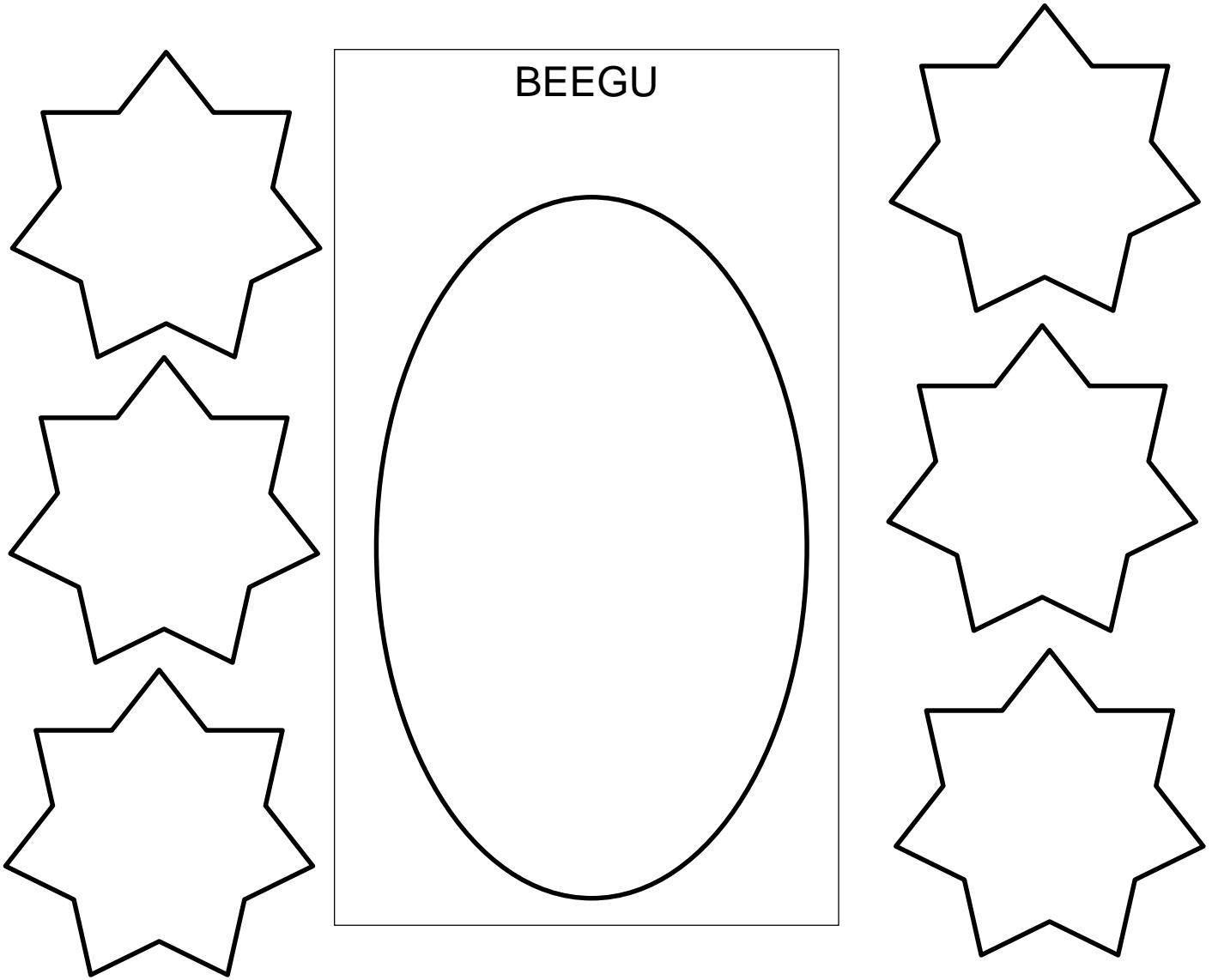
Your child will know which challenge they usually access in each subject and which task will be appropriate for them.

| Year group: 2 Date: 20.05.20 | | | |
|-----------------------------------|--|--|---|
| English |  | <p>Today we are going to share the story. Click on the link below https://www.youtube.com/watch?v=OaX_zGZO0Y8</p> <p>Listen to the story and think about the character of Beegu</p> |  |
| | <p>Today we are going to be writing a description of the character. We need to include lots of adjectives (describing words) in a description. Click on the link here https://www.bbc.co.uk/bitesize/topics/zrqqtfr/articles/zy2r6yc and watch the clip about adjectives and complete the 2 activities.</p> | | |
| | Challenge 1 | Challenge 2 | Challenge 3 |
| | <p>Draw a picture of Beegu and complete 6 adjectives. Use these and some others to write 2A sentences about the Alien character.</p> <p>Read out your sentences to your adult. Have you remembered to put a comma between your adjectives in your 2A sentences?</p> | <p>Draw a picture of Beegu and complete 10 adjectives. Use these to write a description of the character including 2A sentences, compound sentences and a statement sentence (remember the work completed yesterday).</p> <p>Read out your description to your adult. Have you remembered to put a comma between your adjectives in your 2A sentences?</p> <p>Did you manage to complete a statement sentence?</p> | <p>Draw a picture of Beegu and complete 10 adjectives. Use these to write a description of the character including different sentence types including 2A, compound, statement and exclamation. Look back at your work from yesterday if you need a reminder!</p> <p>Read out your description to your adult. Have you remembered to put a comma between your adjectives in your 2A sentences?</p> <p>Did you manage to complete a statement sentence?</p> |

| | | | |
|----------------|--|---|---|
| Maths | <p>Warm Up – follow this link to complete your maths warm up.</p> <p style="text-align: center;">https://www.topmarks.co.uk/maths-games/daily10</p> <p style="text-align: center;">Choose Level 2 – Addition</p> <p style="text-align: center;">Complete the adding three one- digit numbers task and the two-digit numbers task.</p> | | |
| | Challenge 1 | Challenge 2 | Challenge 3 |
| | <p>Complete the different types of addition number sentences – some are just adding two numbers, some have missing numbers and some are adding 3 numbers.</p> <p>Do any working out you need to in your book / on a whiteboard.</p> <p>Remember when you are adding start with the biggest number and count on.</p> <p>Remember to complete your problem solving task too!</p> | <p>Complete the different types of subtraction number sentences.</p> <p>Do any working out you need to in your book / on a whiteboard.</p> <p>You could draw tens and ones but remember you need to draw the largest number and cross out the smallest number to see what is left.</p> <p>Remember to complete your problem solving task too!</p> | <p>Complete the different types of missing number sentences.</p> <p>Do any working out you need to in your book / on a whiteboard.</p> <p>Remember to complete your problem solving task too!</p> |
| Reading | <p>Log in to Oxford Owl and search for the text Spaceship Graveyard. Continue to read / listen to the story up to page23.</p> | | |
| Phonics | <p>Complete the activity sheet below looking at contractions e.g. spelling words like should have as should've.</p> | | |
| Other | <p>Today we are going to do some Science.</p> <p>At School we went on Autumn and Winter walks to find out about the weather. The current season is Spring but it is changing soon into Summer. Firstly, visit https://www.bbc.co.uk/bitesize/topics/zkvv4wx/articles/zcx3gk7 Then, I want you to carefully go outside and look at what is happening to the plants, trees and weather.</p> <ul style="list-style-type: none"> • Are there leaves on the trees? What colour are they? • Are the plants flowering or growing? • What is the weather like today? What has it been like recently? Cold or warm, dry or rainy? <p>Then either write about Spring or draw and label a picture to show the season. We can't wait to see them.</p> | | |

Unless otherwise specified, please complete the tasks in either your home learning book or print out the document below.

English Challenge 1 Draw the character and then write 6 adjectives in the stars around the picture.




Write some super 2A sentences about the character below.

English Challenge 2 Draw the character and then write lots of adjectives in the banner – try to think about size, shape, colour etc.



BEEGU




Write a super description of the character below, remember to include 2A sentences, compound sentences and a statement sentence if you can!

English Challenge 3 Draw the character and then write lots of adjectives in the banner – try to think about size, shape, colour etc.



BEEGU



Write a super description of the character below, remember to include different types of sentences e.g. 2A, statement and exclamation.

Maths Challenge 1

1 $1 + 3 = \square$

2 $4 + 6 = \square$

3 $21 + 5 = \square$

4 $7 + 42 = \square$

SECTION B

1 $24 + 7 = \square$

2 $8 + 58 = \square$

3 $\square = 76 + 6$

4 $35 + 9 = \square$

SECTION C

1 $\square = 98 + 3$

2 $32 + 7 + 3 = \square$

3 $6 + 5 + 12 = \square$

4 $91 + 4 + 8 = \square$

1 $14 + 43$

2 $41 + 36$

3 $43 + 44$

Problem Solving

Addition and Subtraction to 100 Word Problems

7. If you have 47 dollars and you find another 13 in your pocket, how many dollars would you have?



Addition and Subtraction to 100 Word Problems

8. If you have 57 gobstoppers and eat 18 of them, how many would you have left?



Maths Challenge 2

| | | |
|------------------|------------------|------------------|
| 1 86 - 24 | 2 99 - 74 | 3 46 - 21 |
| | | |
| | | |
| | | |
| | | |
| | | |

SECTION B

| | | |
|------------------|------------------|------------------|
| 1 62 - 33 | 2 74 - 57 | 3 84 - 69 |
| | | |
| | | |
| | | |
| | | |
| | | |

SECTION C

| | | |
|------------------|------------------|------------------|
| 1 84 - 17 | 2 81 - 26 | 3 91 - 16 |
| | | |
| | | |
| | | |
| | | |
| | | |

Challenge

Addition and Subtraction to 100 Word Problems

9. If you bake 50 cookies and then bake another 45, how many cookies would you have baked?




Addition and Subtraction to 100 Word Problems

10. If you have 28 marbles and win another 29, how many marbles would you have?



Addition and Subtraction to 100 Word Problems

11. If you count 67 rabbits in a field and 52 of them hop away, how many rabbits would be left?



Addition and Subtraction to 100 Word Problems

12. If you count 70 leaves on a path and another 24 leaves fall to the ground, how many leaves would there be?



Maths Challenge 3

1 $5 + \square = 9$

2 $\square - 3 = 5$

3 $\square - 2 = 43$

4 $\square + 10 = 56$

SECTION B

1 $\square - 8 = 23$

2 $32 = 28 + \square$

3 $56 + \square = 83$

| | | | | | | | |
|--|--|--|--|--|--|--|--|
| | | | | | | | |
| | | | | | | | |
| | | | | | | | |

4 $\square - 34 = 82$

| | | | | | | | |
|--|--|--|--|--|--|--|--|
| | | | | | | | |
| | | | | | | | |
| | | | | | | | |

SECTION C

1 $88 = 24 + \square$

2 $523 - \square = 518$

3 $\square + 35 = 92$

| | | | | | | | |
|--|--|--|--|--|--|--|--|
| | | | | | | | |
| | | | | | | | |
| | | | | | | | |

4 $94 = \square - 37$

| | | | | | | | |
|--|--|--|--|--|--|--|--|
| | | | | | | | |
| | | | | | | | |
| | | | | | | | |

Challenge 3 Problem Solving

Addition and Subtraction to 100 Word Problems

14. If you have 38 lollies and buy 19 more, how many lollies will you have?



Addition and Subtraction to 100 Word Problems

15. If you have 68 people on the bus and 26 get off, how many people are left?



Addition and Subtraction to 100 Word Problems

16. If you spot 36 butterflies in your garden and 11 more join them, how many butterflies would there be altogether?



Addition and Subtraction to 100 Word Problems

17. If 96 people are making sandcastles on the beach and 18 go for a swim, how many people are left making sandcastles?



Phonics Task

Write the contractions in the space below.

1 should have

2 they will

3 have not


4 has not

5 could have

6 they are

7 do not

8 can not



Write the words that have been shortened to form contractions.

9 didn't

10 let's

11 we've

12 isn't

13 it'll

14 couldn't

15 they'd

16 I've

