



Year 2

Please find today's learning tasks below.

The table below explains the tasks and you will find the resources underneath.

Your child will know which challenge they usually access in each subject and which task will be appropriate for them.

Year group: 2				Date: 26.06.20			
English		<p>Today you are going to continue learning about London.</p> <p>Start by sharing the link: https://www.youtube.com/watch?v=MHxSq4c_E6g&safe=active</p>					
		Challenge 1		Challenge 2		Challenge 3	
		<p>Today you need to read the information below about the London Eye and then answer the questions about the page.</p> <p>Remember to answer the sentences using full sentences.</p>					
Maths		 <p>Complete the interactive 'Number bonds within 100' activity on the following link:</p> <p>http://www.wldps.com/gordons/Triangular_cards.swf</p>					
		Challenge 1		Challenge 2		Challenge 3	
		<p>Today you will be continuing to learn about temperature.</p> <p>Complete the sheets below.</p>					

Reading	Log in to Oxford Owl and complete the reading of 'Chamber of Treasures' reading / listening to pages 19 – end.
Phonics	Complete the misspelt words task below.
Other	<p>Today we are going to complete PE</p> <p>Click on the Link Here: https://www.youtube.com/watch?v=9vDjXxRjkXk&safe=active and join in with the Cosmic Yoga Session all about visiting London and helping a little pigeon called Nelson settle in to his new home.</p>  <p>Session lasts about 30 minutes.</p>

Unless otherwise specified, please complete the tasks in either your home learning book or print out the document below.

The London Eye



The London Eye is the most popular paid tourist attraction in the United Kingdom, visited by over 3 million people every year!

The London Eye was opened by Tony Blair (who was the Prime Minister at the time) on December 31st 1999. This is why it is sometimes called the Millennium Wheel. By June 2008, over 30 million people had been on it!

Did you know?
It takes 30 minutes to go all the way round the wheel.

It's wheely expensive!

The cost of going on the London Eye is £15.50 for adults or £7.75 for children.

Get on quick!

The wheel moves so slowly that it doesn't stop to let people on - you have to get on and off while it is still moving!



There are 32 capsules on the wheel, each one holding up to 24 people.



English ALL Groups

Answer these questions about the information you have read about

The London Eye.

1) How many people visit the attraction each year?

2) When was the London Eye opened?

3) How many capsules are there on the wheel?

4) How long would it take to travel all the way around the wheel?

5) Why is the wheel sometimes called the 'Millennium Wheel'?

6) True / False?

The wheel was opened by Tony Brian. True False

Each capsule holds up to 24 people. True False

The wheel is the same shape as a Rugby ball. True False

The London Eye is on the bank of

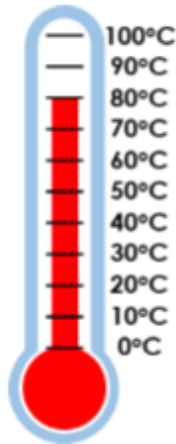
the River Thames. True False

Maths Task ALL Groups

1a. Carter is reading the temperature outside. He says,



It is 8°C.



Is he correct?
Explain why.

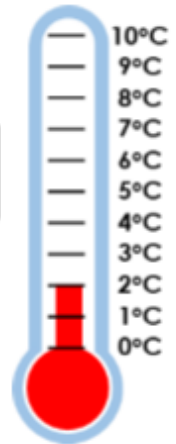


R

1b. Evelyn is reading the temperature outside. She says,



It is 2°C.




Is she correct?
Explain why.




R

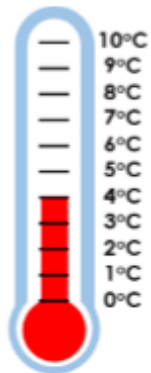
2a. Which thermometer is the odd one out? Explain why.



A



B




C

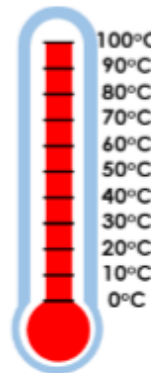


R

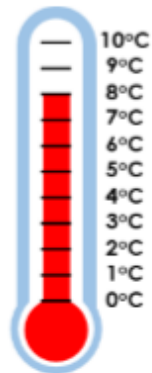
2b. Which thermometer is the odd one out? Explain why.



A



B



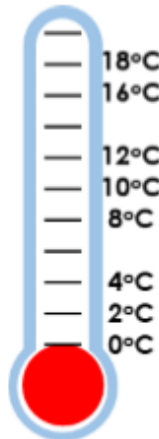
C



R

6a. Mason is describing a temperature. Draw on the thermometer, one possibility of what the temperature could be.

This temperature is an even number which is higher than 11°C.

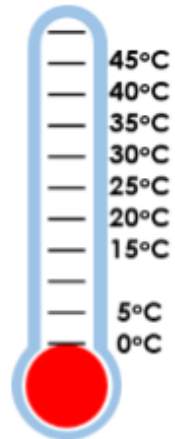


PS



6b. Isabella is describing a temperature. Draw on the thermometer, one possibility of what the temperature could be.

This temperature is a 2-digit number which is in the 10 x table.



PS

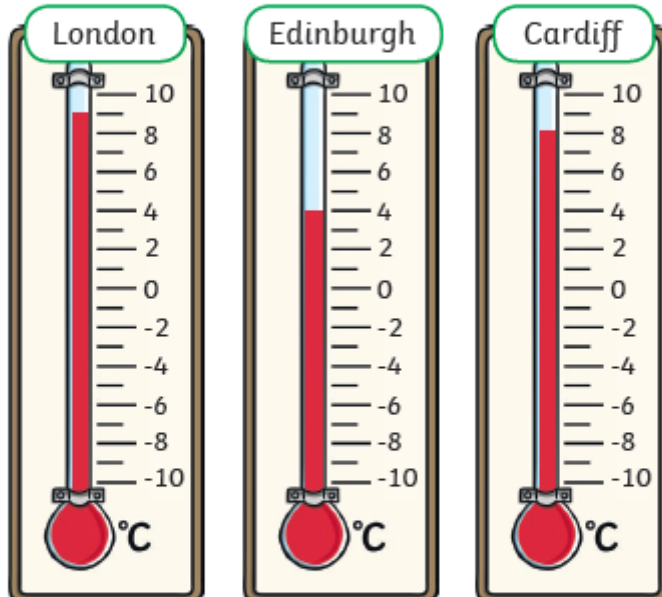


Reasoning / Problem Solving ALL Groups

Temperature



These thermometers show the temperature at different weather stations around the UK.



How many more degrees warmer is London than Cardiff?

Belfast is warmer than Edinburgh but cooler than London. What could the temperature be in Belfast?

Which month do you think these temperatures might have been measured in? Why?

