


	Challenge 1	Challenge 2	Challenge 3
English	<p>Can you watch the video by clicking on the link from 1 minute 13 seconds to 1 minute 41 seconds and then write a mini retell for each picture?</p> <p>https://www.literacyshed.com/uglysharkling.html</p> <p>Remember to include:</p>  <p>There are spellings to help you.</p>	<p>Use the image of the fairy tale house to</p> <p>A) Label what you can see in the picture B) To write a setting description.</p> <p>Remember to include:</p> <p>Adverbs Verbs Powerful adjectives Prepositions</p> <p>Use the example to help you.</p>	<p>Use the image of the fairy tale house to</p> <p>A) Label what you can see in the picture B) To write a setting description.</p> <p>Remember to include:</p> <p>Adverbs Verbs Powerful adjectives Prepositions</p> <p>Use the example to help you.</p> <p>Extra challenge - remember those range of conjunctions ISAWAWABUB</p> <p>Use the example to help you.</p>
Maths	<p>a) Can you draw 2 different combinations of the same amount in the purses? (use the coin mat to help you see what coins you could use)</p> <p>b) TTrackstars</p>	<p>a) Can you use the column method to add the 2 amounts together to see what items you could buy with a £5 note?</p> <p>b) TTrackstars</p>	<p>a) Can you draw a number line to work out how much change you will receive from £5 and £10?</p> <p>b) TTrackstars</p>
Reading/ Spellings	<p>Can you practice writing the spellings and then fill in the missing gaps?</p> <p>Don't worry if you have finished your home links book. Why not have a look at the e books that have been added to this week's folder and get stuck into one of those.</p>	<p>Can you practice writing the spellings and then fill in the missing gaps?</p>	<p>Can you practice writing the spellings and then fill in the missing gaps?</p>

Other

Computing - Animation - Can you create a flip book to show a ball bouncing up and down. Don't worry if you can't remember just follow this clip.

<https://www.youtube.com/watch?v=9Z76UAhGqko>

Challenge | spellings

Look and say	Look, say and write	Cover and write	Check and write again
again			
half			
money			
Mr			
Mrs			

Fill in the missing word.

1. _____ Kipling makes yummy cakes.
2. My teacher is called _____ Smith.
3. I have some _____ for some buns.
4. I want to go back _____ .
5. Bedtime is _____ past seven.

Challenge 2 and 3 spellings

Look and say	Look, say and write	Cover and write	Check and write again
favourite			
February			
forward			
fruit			
grammar			

Fill in the missing word.

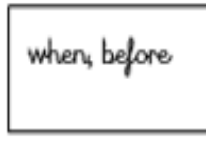
1. My _____ flavour of ice-cream is chocolate.
2. My birthday is in _____ .
3. Move your chess piece _____ to the black square.
4. I enjoy learning the rules of _____ .
5. I eat lots of _____ every day.

Write your own sentences using:

1. favourite 2. February 3. forward 4. fruit 5. grammar

Challenge 1 English

Vocabulary to help



Spellings to help:

Spellings

Spider Harry hairy
black large cuddly
goggles curly hair
fish scaly snorkel
swimming shark

ly words

carefully happily joyfully
slowly quickly

Openers

Just then Suddenly
Next Today
At that moment

because

when

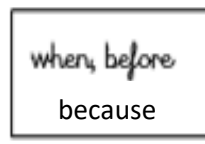
before

Example sentence:

At that moment, Harry was sitting happily in the car because he was going to the seaside with his best friend, who was a large, hairy spider.

Challenge 1 - write a retell for each picture after watching the video.

Look at the example sentence on the page above.







Challenge 2 and 3 English

Part 1 - Can you label all the things you can see in the picture?



Part 2 - Can you write a setting description using the picture and the things you have identified?

Example in your description remember to include some powerful verbs, powerful adjectives adverbs, prepositions and sentence openers.

Peering from behind the towering, leafy tree, I gazed curiously towards the magical house which stood amongst a large, glorious garden. In front of me, was a range of arched windows all around the house with glimmering lights shining through them.



[illegible]

Maths challenge | help sheet





I have 50p in each of my purses. Can you draw the coins I could possibly have?

Show me a different combination in each purse.





I have 20p in each of my purses. Can you draw the coins I could possibly have?

Show me a different combination in each purse.



I have £1 in each of my purses. Can you draw the coins I could possibly have?

Show me a different combination in each purse.



Task 2

Which amount is the odd one out and why?



Maths challenge 2 help

To add different amounts of money.

$$\begin{array}{r} £3.25 \\ + £1.30 \\ \hline £4.55 \end{array}$$

ones column


Remember to write your amounts in columns as shown.

Remember to write £ and .

Always start adding from the ones column first.

What 2 items could I buy for £5. Use the column method to add them together. *Show 2 different possibilities.*

Item	Amount
Tissues	£1.29
Pens	£3.65
Pencils	£1.35
Magazine	£2.95



Maths challenge 2 (page 2 of 4)

What 2 items could I buy for £5. Use the column method to add them together. **Show 2 different possibilities.**

Item	Amount
Socks	£3.25
Books	£3.65
Newspaper	£1.10
Teddy	£2.95
Crisps	£0.85

Maths challenge 2 (page 3 of 4)

What 2 items could I buy for £5. Use the column method to add them together. Show 2 different possibilities.

Item	Amount
Cereal	£1.89
Teddy	£3.65
Candle	£1.25
Cup	£2.65
Pencil case	£2.35

Maths challenge 2 (page 4 of 4)

Task 2

True or False?

Item	Amount
Socks	£3.25
Books	£3.65
Newspaper	£1.10
Teddy	£2.95
Crisps	£0.85

True or false?

If I go to the shop with my £5 note, I could buy some books and a newspaper with my money and still have some change.

show your workings below

Maths challenge 3 Help

Draw a number line to help you work out the amount of change.

Remember to:

- A) Draw a blank line
- B) Start the line with the amount given
- C) Jump to the nearest ten first
- D) Jump in tens to the nearest pounds
- E) Jump in pounds until you reach £5 / £10

£3.63 £3.70 £3.80 £3.90 £4.00 £5.00

Maths challenge 3 - use the help sheet above to work out how much change you will receive?

Draw a number line for each one to work out the answer.

ch 3

I have a £5 note. How much change will I have if I spend

A) £3.57

B) £2.45

C) £1.28

I have a £10 note. How much change will I have if I spend:

A) £6.29

B) £ 8.31

Activ
Go to

Challenge 3 task 2

True or False?

Item	Amount
Socks	£3.25
Books	£3.65
Newspaper	£1.10
Teddy	£2.95
Crisps	£0.85

True or false?

If I go to the shop with my £5 note, I could buy some books and a newspaper with my money and still have some change.