


Year group: 3

Date:

	Challenge 1	Challenge 2	Challenge 3
English	<p>Can you watch the video by clicking on the link from 38 seconds to 1 minute 13 seconds and then write a mini retell for each picture?</p> <p>https://www.literacyshed.com/uglysharkling.html</p> <p>Remember to include:</p>  <p>There are spellings to help you.</p>	<p>Use your story map from yesterday to complete the story starter given to describe what you think is inside the fairy tale house?</p> <p>Remember to include:</p> <p>Adverbs Verbs Powerful adjectives Prepositions</p> <p>Use the example to help you.</p>	<p>Use your story map from yesterday to complete the story starter given to describe what you think is inside the fairy tale house?</p> <p>Remember to include:</p> <p>Adverbs Verbs Powerful adjectives Prepositions</p> <p>Extra challenge - remember those range of conjunctions ISAWAWABUB Use the example to help you.</p>
Maths	<p>a) Can you count the value of the coins shown?</p> <p>b) TTRockstars</p>	<p>a) Can you identify the amounts of the coins and notes and compare them?</p> <p>b) TTRockstars</p>	<p>a) Can you convert the coins from pence to pounds?</p> <p>b) TTRockstars</p>
Reading/ Spellings	<p>Can you practice writing the spellings and then fill in the missing gaps?</p> <p>Don't worry if you have finished your home links book. Why not have a look at the e books that have been added to this week's folder and get stuck into one of those.</p>	<p>Can you practice writing the spellings and then fill in the missing gaps?</p>	<p>Can you practice writing the spellings and then fill in the missing gaps?</p>
Other	<p>Art - Silhouettes - Can you create a wild west silhouette. Have a look the examples to give you some inspiration.</p>		

Challenge 1 spellings

Look and say	Look, say and write	Cover and write	Check and write again
many			
clothes			
busy			
people			
water			

Fill in the missing word.

1. My _____ got covered in mud!
2. There are lots of _____ on the bus.
3. It is very _____ in town today.
4. I drink _____ with my lunch.
5. How _____ sweets are left?

Challenge 2 and 3 spellings

Look and say	Look, say and write	Cover and write	Check and write again
exercise			
experience			
experiment			
extreme			
famous			

Fill in the missing word.

1. Adele is a _____ singer.
2. In science last week, we did an _____ .
3. Going on the school trip was a great _____ .
4. I like to do basketball to get some _____ .
5. That is an _____ reaction!

Write your own sentences using:

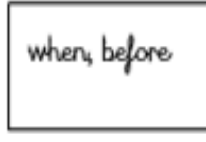
1. exercise
2. experience
3. experiment
4. extreme
5. famous

Activate Windows

Go to Settings to activate Windows.

Challenge | English

Vocabulary to help



Spellings to help:

Spellings

Spider Harry hairy
black large cuddly
goggles curly hair
fish scaly snorkel
swimming shark

ly words

carefully happily joyfully
slowly quickly

Openers

Just then Suddenly
Next Today
At that moment

because

when

before

Example sentence:

At that moment, Harry was sitting **happily** in the car **because** he was going to the seaside with his best friend, who was a **large, hairy spider**.

Challenge 1 - write a retell for each picture after watching the video.
Look at the example sentence on the page above.

joined
writing

2A

WOW
words



when, before
because

ly







Challenge 2 and 3 English - Can you use your story map from yesterday to continue the story? What do you think you will find as you enter the house? What is the house like inside?

Story starter!


Timidly, she pushed back the branches and peered into the clearing. Sunshine drenched the ground as it poured through the canopy above.

She had been following the trail of clues for days, and she had finally reached her destination. Were the stories true? Was this really the place people in her village had talked about for centuries?



In your story remember to include some **powerful verbs**, **powerful adjectives** **adverbs**, **prepositions** and **sentence openers**.

Example: **Curiously**, as I **crept** towards the **tall, arched** door with a canopy **above** I felt nervous about what I would find. **Slowly**, I **opened** the door and **peered** inside as I was amazed to discover **beautiful, bright lights** covering the ceiling **above** me.



Count money – pence

1 What is the value of each coin?



2 How much money is there?



3 How much money is there?

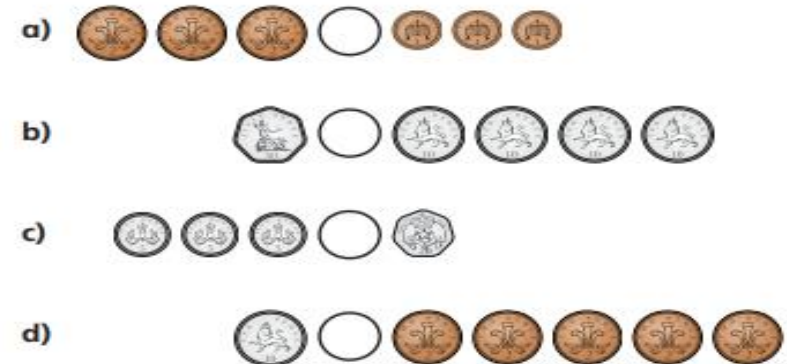


4 Dexter has this money.



How much money does Dexter have?

5 Write $<$, $>$ or $=$ to compare the money.



Challenge 1 task 2

Annie has this money.



Tommy has this money.



I have more money because I have more coins.








Is Annie correct?

How do you know?


Challenge 2 Maths


Pounds and pence


1 Match the amounts that are equal.

16p	
twenty-five pence	
£25	
sixty pence	
twenty pounds	

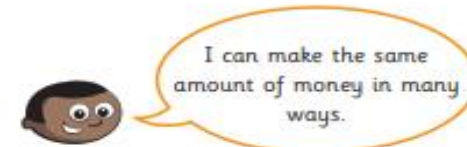
2 How much money does each person have?

a) 

b) 

c) 

3



		
---	---	---

What amount has Mo made?

Make this amount another way.

Draw your coins.

Compare answers with a partner. Is there another way?

4

Dora earns £10 for walking the dog.

Which money is Dora given?

		
---	---	---

Challenge 2 task 2

Count the money.



Can you discover which amount Mrs Bickerton has wrote incorrectly?

Can you write the correct amount?

A) £31.50

B) £12

C) 22.25

D) £20.50

E) £11.61

Challenge 3 Maths

Convert pounds and pence

- 4 Write each amount in pounds and pence.
- a) 274p b) 592p c) 111p d) 405p
 374p 591p
 474p 590p

Example
 A) = £2 and 74 p

- 5 Annie has some coins.



- a) How much money does Annie have?
 b) What is 10p more?
 What is 10p less?
 c) What is 100p more?
 What is 100p less?

- 6 What amount is represented in each box?



- 7 Eva empties out her money box.



How much money was in her money box?
 How did you count the coins? Compare with a partner.

- 8 a) What is the fewest number of coins you can use to represent 315p?
 b) Use 6 coins to make an amount that is more than £3, but less than £4.
 Draw your answer.
 Compare answers with a partner.

Challenge 3 task 2

Can you choose the odd one out?

£2.75

275p

150p + 50p + 75p

£1 + 100p + 65p + 20p

200p + 75p

100p + £1 + 75p

Art

