

Learning Lions

Please find today's learning tasks below.

The table below explains the tasks and you will find the resources underneath.

Your child will know which challenge they usually access in each subject and which task will be appropriate for them.

Year group: 2 Date:			
English	Click on the link below to start to think about the Giant's Castle. https://www.bbc.co.uk/teach/class-clips-video/english-ks1-jack-and-the-beanstalk-pt8/zbcmy9g		
	Challenge 1	Challenge 2	Challenge 3
	Look at the picture of the Giant's castle and think of 10 adjectives. Use these to write some 2A sentences about the castle.	Write a description of the Giant's Castle. Use some super 2A sentences in your description. <u>Remember you are only describing the castle not writing the story!</u>	Write a description of the Giant's Castle. Use some adventurous adjectives and complex sentences in your description. <u>Remember you are only describing the castle not writing the story!</u>
Maths	Warm Up – follow this link to complete your maths warm up. http://www.wldps.com/gordons/Paying_for_ice_creams.swf Start with up to 50p and then move onto £1 - £3 if you feel confident! 😊		
	Challenge 1	Challenge 2	Challenge 3
	Complete the properties of shapes activity below.	Complete the properties of shapes activity (below). Can you name the shapes using the following words? quadrilateral triangle heptagon Remember to complete your reasoning task.	Complete the properties of shapes activity (below). Can you name the shapes using the following words? quadrilateral triangle heptagon Remember to complete your reasoning task.

Reading	<p>Please follow the link below to access online reading books.</p> <p>Go to https://www.roythezebra.com/guided-reading-stories/chapter2.html#/section0</p>
Phonics	<p>Roy the Zebra website tells the story of the worst zoo in the world. You can read or listen to the story, answer questions before and after reading.</p> <p>Complete a quick spell of these 10 Common Exception Words.</p> <p>Father plant path everyone kind beautiful Mr Mrs</p> <p>Money children</p>

Other



Today's subject focus will be Geography

Watch the link here:
<https://www.youtube.com/watch?v=Q9nlu19VU9M> (watch the story of Percy the Park Keeper and the Secret Path)

Create your own maze for Percy and the Park animals – look at the picture here and create your own maze.

Unless

otherwise specified, please complete the tasks in either your home learning book or print out the document below.

English Challenge 1



Think of 10 of your own adjectives to describe the castle.

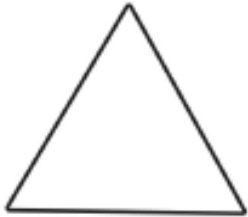
Write some 2A sentences – like the one below.

The dark, towering castle in the clouds.

Maths Challenge 1

Properties of 2D Shapes

Write down the properties of the shapes.




A triangle has ___ sides.

A triangle has ___ corners.



A rectangle has ___ sides.

A rectangle has ___ corners.



A square has ___ sides.

A square has ___ corners.

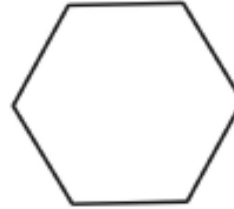


A quadrilateral has ___ sides.

A quadrilateral has ___ corners.

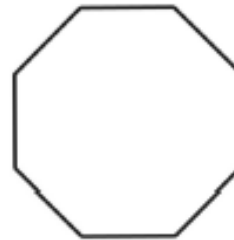
Properties of 2D Shapes

Write down the properties of the shapes.



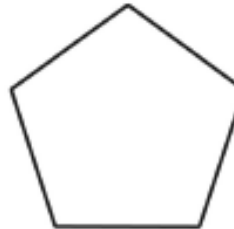
A hexagon has ___ sides.

A hexagon has ___ corners.



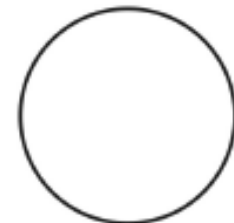
An octagon has ___ sides.

A octagon has ___ corners.



A pentagon has ___ sides.

A pentagon has ___ corners.



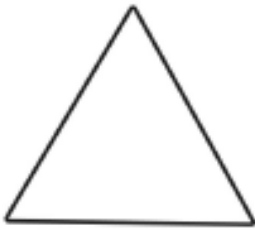
A circle has ___ side.

A circle has ___ corners.

Maths Challenge 2 and 3

Properties of 2D Shapes

Write down the properties of the shapes.



What are the properties of a triangle?

This is a triangle. This triangle has 3 equal sides. It has 3 straight edges and 3 vertices.



What are the properties of a rectangle?



What are the properties of a square?



What are the properties of a quadrilateral?

Name these shapes!

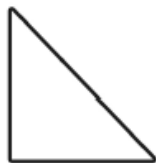


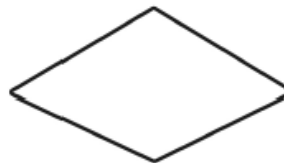


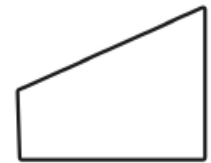
















Maths Challenge 2 and 3 Reasoning

Count Vertices on 2D Shapes



In each row, count the vertices on each shape and circle the odd one out. Explain your answers.



Reading Activity

Troll's Troubles

2 Dear diary,

11 I love my little house underneath the bridge in
21 the valley but I get very grumpy when I hear
30 grubby, little goats trotting over the top of it
39 when I am trying to sleep. One morning, three
48 goat brothers made a plan to cross my bridge;
58 they knew it would make me cross. One at a
66 time, they bashed their hooves across the bridge.
77 When I went outside to tell them to be quiet, the
87 biggest goat pushed me with his horns and I fell
98 off the bridge into the river. I was furious! I think
103 I'm going to move house.

106 Dave the Troll



Quick Questions



1. Why does the troll get grumpy when people cross the bridge?



2. Number these events from 1 to 3 to show the order they happened in.

_____ The troll decided to move house.

_____ The three goats made a plan.

_____ The biggest goat pushed the troll.



3. Where does the troll live?



4. Find and copy two adjectives in the text which mean the same as 'angry'.
