








Year 2

Please find today's learning tasks below.

The table below explains the tasks and you will find the resources underneath.

Your child will know which challenge they usually access in each subject and which task will be appropriate for them.

Year group: 2				Date: 03.06.20			
English	You need to re-read the story 'The Way Back Home.' Today you can watch a different version https://www.youtube.com/watch?v=RbyUrb0X5iU						
	Challenge 1		Challenge 2		Challenge 3		
	Today, you are going to retell the story using a story board. Tomorrow you will start writing the story so this will help you to remember it. Draw pictures and write a few prompt words on the storyboard below.						
Maths	Warm Up – follow this link to complete your maths warm up.						
			https://www.topmarks.co.uk/maths-games/daily10 Choose Level 2 – Multiplication Complete the mixed x2, x5, x10 activity. If you ZOOM through, you can challenge yourselves to the x3 task.				

	Challenge 1	Challenge 2	Challenge 3
	<p>Complete the activity sheet below – you are practicing counting in 2s, 5s and 10s and completing multiplication number sentences.</p> <p>Remember to complete your problems / reasoning task.</p>	<p>Complete the activity sheet below – you are practicing counting in 2s, 5s and 10s and completing multiplication number sentence and solving problems.</p> <p>Remember to complete your problems / reasoning task.</p>	<p>Complete the activity sheet below – you are practicing counting in 2s, 5s and 10s and completing multiplication number sentence and solving word problems.</p> <p>Remember to complete your Spaceship problem finding 2 different solutions.</p>
Reading	Log in to Oxford Owl and find the text Way Out – Day Out and read up to page 11		
Phonics	Can you solve these muddled Common Exception Words (See task below)		
Other	<p>Today we are going to start to plan some D&T.</p> <div style="display: flex; align-items: flex-start;"> <div style="margin-right: 20px;">  <p>PAPER PLATE UFO CRAFT</p>  </div> <div style="margin-right: 20px;"> <p>Aliens in a Paper Plate Spaceship Craft</p>  </div> <div>  <p>These are some suggestion to make an Alien Spacecraft using Paper plates / cups etc. You could always cut out paper / card to make your spaceship. Be as creative as you can, but think about how you can cut and join the materials you will use.</p> <p>Today you will complete the planning sheet for the task and tomorrow you will make your Alien Space Craft. Complete the planning task sheet below.</p> </div> </div>		


Unless otherwise specified, please complete the tasks in either your home learning book or print out the document below.

English Challenge 1









English Challenge 2




















English Challenge 3





Phonics / Spelling

Can you spell these muddled words?

remos = _____

lchteso = _____

dbhnie = _____

vyreedybo = _____

dmin = _____

ldho = _____

emnoy = _____

dholsu = _____



rpimvoe = _____

rseu = _____




Maths Challenge 1

Coin Multiplication

How much money is in each piggy bank? Write a multiplication number sentence for each set of coins.



$$4 \times 2 = 8\text{p or } 2 \times 4 = 8\text{p}$$



Problem Solving Challenge 1

Daniel has 20p in his pocket. He has four coins. What coins are they?

Samira also has 20p but she has 10 coins. What coins are they?

Make Equal Groups



Kazeem had twenty 1p coins.



How many groups will Kazeem make if he puts...

...two coins in each group?

...five coins in each group?


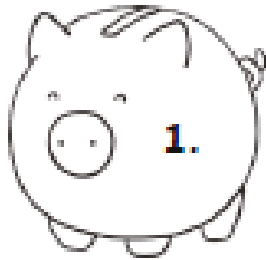
...ten coins in each group?

What other equal groups could Kazeem make?




Maths Challenge 2

Coin Multiplication

How much money is in each piggy bank? Write a multiplication number sentence for each set of coins.




$$4 \times 2 = 8\text{p or } 2 \times 4 = 8\text{p}$$







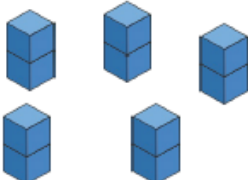
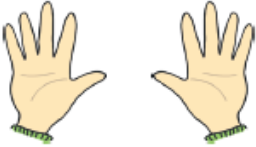
Maths Challenge 2 Reasoning / Problem Solving

- Daniel has 20p in his pocket. He has more than one coin, and all the coins are the same. What coins could he have?

How many different ways can you find?

Make Equal Groups 

Spot the odd one out.


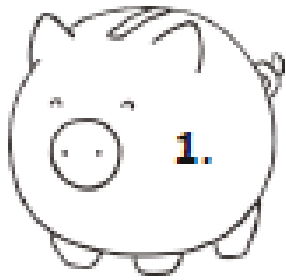
	
	
	

Explain how you know that this is the odd one out.


Maths Challenge 3

Coin Multiplication





How much money is in each piggy bank? Write a multiplication number sentence for each set of coins.



$$4 \times 2 = 8\text{p or } 2 \times 4 = 8\text{p}$$



Challenge 3 Cont'd



7. Daniel has 40p in his pocket. He has eight coins. What coins are they?

8. Samira has 50p in her pocket. She has more than one coin, and all the coins are the same. What coins could she have?

9. James has eight 5p coins. Ben has five 10p coins. Who has the most money?

Problem Solving /Reasoning Challenge 3

Spaceship



Some Tripods and Bipods flew from planet Zeno.
There were at least two of each of them.

Tripods have 3 legs.

Bipods have 2 legs.

There were 23 legs altogether.

How many Tripods were there?

How many Bipods?

Find two different answers.



D&T Topic Task

Alien Space Ship Design and Make Activity

My Alien Space ship will look like this... (Draw and label your design).

Design

Make

Aliens in a Paper Plate
Spaceship Craft



To make my Alien Spaceship I will need... (list your materials)

- _____
- _____
- _____
- _____
- _____

How I will join different materials together... (explain your techniques)
