



Year 2

Please find today's learning tasks below.

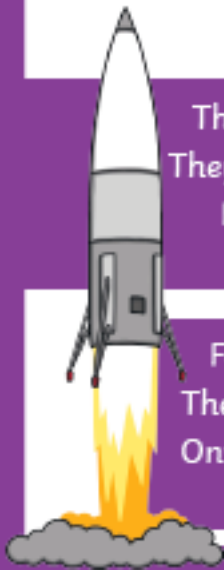
The table below explains the tasks and you will find the resources underneath. Your child will know which challenge they usually access in each subject and which task will be appropriate for them.

Year group: 2		Date: 15.06.20	
English		This week we are continuing to focus on Space, but through looking at some Poetry.	
	Challenge 1	Challenge 2	Challenge 3
	Read the Poem called 'BLAST OFF!'		
	Share the link <a href="https://www.bbc.co.uk/bitesize/topics/z4mmn39/articles/ztdvw6f">https://www.bbc.co.uk/bitesize/topics/z4mmn39/articles/ztdvw6f</a> to learn all about Acrostic Poems		
	Today you are going to write your own acrostic poem for the words BLAST OFF, remember to start each line of your poem with the letters given e.g.		
	<b>B</b> lasting off into the night go rockets.		

<b>Maths</b>	 <p>Log in to TT Rock Stars to complete your x tables challenges (your login is in your Blue Home School Book)</p>		
	<b>Challenge 1</b>	<b>Challenge 2</b>	<b>Challenge 3</b>
	<p style="text-align: center;">This week we are completing some work on Statistics – data. Today we are going to complete some work on Tally Charts – we’ve done this topic in our maths already, so you should be able to practise the skills already learnt this week. Click on this link to remind yourself of Tally Charts <a href="https://www.bbc.co.uk/bitesize/clips/z7r9jxs">https://www.bbc.co.uk/bitesize/clips/z7r9jxs</a> Complete the activity sheet below completing a Tally Chart for the vehicles and answering questions about the data.</p>		
<b>Reading</b>	Complete the Reading Comprehension Task (See sheet below)		
<b>Phonics</b>	Complete the spelling activity sheet below – correcting the misspelt words.		
<b>Other</b>	Today we are going to do some <b>Geography</b> Venus is one of the planets we have been learning about. Share this link to remind yourself / learn about it. <a href="https://www.bbc.co.uk/bitesize/clips/zjspyrd">https://www.bbc.co.uk/bitesize/clips/zjspyrd</a> Share the PPT (PDF version on website) and then complete a fact sheet (below) about the planet Venus to share what you have learnt.		

Unless otherwise specified, please complete the tasks in either your home learning book or print out the document below.

# Blast Off!



The rocket hums quietly. The engines now roar.  
They check all the buttons, the seats and the door.  
Mission Control starts the final countdown;  
TVs are turned on all over the town.

For a moment it's quiet, then whoosh they are gone.  
The ground shrinks behind them. The engines power on.  
Onwards and upwards through the clouds they now go;  
Houses and buildings left far down below.

They look out of the window as darkness comes near.  
The Earth looks so tiny – there's nothing to fear.  
The roar has now gone; it is quiet instead.  
A helmet sits tightly on an astronaut's head.



The planets fly by them – the colours so bright;  
Saturn and Jupiter shine in the night.  
Ruby red Mars now comes into view.  
A quick trip to Venus and Uranus too.



The stars twinkle brightly still so far away;  
Maybe a rocket will reach them one day.  
Returning to Earth, journey's over for now.  
Sights so fantastic you can only say 'wow!'





B \_\_\_\_\_

L \_\_\_\_\_

A \_\_\_\_\_

S \_\_\_\_\_

T \_\_\_\_\_


O \_\_\_\_\_

F \_\_\_\_\_

F \_\_\_\_\_

## Maths Task ALL Groups

1. George counted the vehicles passing his school one afternoon. This is what he saw:



Complete a tally chart to show the vehicles that George saw. <https://www.bbc.co.uk/bitesize/clips/z7r9jxs>

Vehicle	Tally	Total
Cars		
Lorries		
Buses		
Motorbikes		

Answer the questions using the vehicle data.

1) How many more cars than lorries did he saw? \_\_\_\_\_

2) Which vehicle did he see the least? \_\_\_\_\_

3) Can you put the vehicles in order from smallest to largest?

\_\_\_\_\_

4) Which type of vehicle did he see the least? \_\_\_\_\_

5) How many buses and motorcycles did he see altogether? \_\_\_\_\_

6) How many more motorbikes did he see than buses? \_\_\_\_\_

7) How many less buses than lorries did he see? \_\_\_\_\_

8) How many vehicles did he see altogether? \_\_\_\_\_

9) What is wrong with this tally?  \_\_\_\_\_

10) Can you write a statement to explain something you have noticed in the data?

# Reasoning Task ALL groups

Y2 Maths Statistics

Nice and Spicy! 

What type of chart is this?

How We Walk to School		
Bike		4
Walk		7
Bike		5
Bus		3

- How many children walk to school?
- What is the most popular way to travel to school?

twinkl.com

Y2 Maths Statistics

Nice and Spicy! 

What type of chart is this?


**Favourite Animals in Class 2B**



- How many children like horses?
- How many children like snakes?
- Which is the favourite animal in Class 2B?

twinkl.com

## Blast Off!




The rocket hums quietly. The engines now roar.  
They check all the buttons, the seats and the door.


Mission Control starts the final countdown;  
TVs are turned on all over the town.

For a moment it's quiet, then whoosh they are gone.  
The ground shrinks behind them. The engines power on.  
Onwards and upwards through the clouds they now go;  
Houses and buildings left far down below.

They look out of the window as darkness comes near.  
The Earth looks so tiny – there's nothing to fear.  
The roar has now gone; it is quiet instead.  
A helmet sits tightly on an astronaut's head.



The planets fly by them – the colours so bright;  
Saturn and Jupiter shine in the night.  
Ruby red Mars now comes into view.  
A quick trip to Venus and Uranus too.



The stars twinkle brightly still so far away;  
Maybe a rocket will reach them one day.  
Returning to Earth, journey's over for now.





1. Which two planets shine in the night? Tick two.

- Earth
- Saturn
- Jupiter

2. Why does Earth look so tiny? Tick one.

- because they are high up in space
- because earth is very small
- because they need glasses

3. Which word from the third verse rhymes with near? Tick one.

- instead
- fear
- head

4. Fill in the missing words.

They check all the \_\_\_\_\_, the \_\_\_\_\_ and the \_\_\_\_\_.

5. What is on the astronaut's head?

---

Who starts the final countdown? Tick one.

- the rocket
- people on the TV
- Mission Control

Number the phrases from the poem to show the order they appear. The first one has been done for you.

- the ground shrinks beneath them
- TVs are turned on
- Mars now comes into view
- the journey is over for now
- 1 the rocket hums quietly

Find and copy two planets that are mentioned in the fourth verse.

---

Which word from the last verse describes how the stars twinkle?

---

Write a new title for this poem

---

Would you like to go to space? Explain your answer.

---

---



## Topic Task

### Solar System

Venus is the second planet from the Sun and it is the second brightest object in the night sky after the Moon.

---

---

---

---

---

---

---

