

Terrific Tigers



























Please find today's learning tasks below.

The table below explains the tasks and you will find the resources underneath. Your child will know which challenge they usually access in each subject and which task will be appropriate for them (it's also in their red home learning book).




























Year group: 1 Date: 25th March			
	Challenge 1	Challenge 2	Challenge 3
English	<p>Practise saying the sounds on sound mat 1 which you can find below and also on the Home learning page.</p>	<p>Learn about owls by reading the text on the PPT slide below.</p> <div data-bbox="1106 571 1379 767" data-label="Image"> </div> <p>Click on the link below and watch a short clip about where animals live.</p> <p>https://www.bbc.co.uk/bitesize/clips/zn84d2p</p>	
	<p>Hold and write a caption for the picture.</p> <p>Fish and chips Fan in the sun Lots of green trees Jump in the rain</p> <p>Extension: Look at the picture attached for challenge 1. I wonder what the little boy can see through the hole in the fence. Think about what he could see and have a go at holding your sentence and writing. Try to think of 2 or 3</p>	<p>Following on from reading the PowerPoint slide below and watching the clip on owls. Complete a page about Owls – you can always do some of your own research on the internet or from a book. Use the sound mats below to help (you can also find these on the home learning page)</p> <p>Complete a page about Owls. What will you include?</p>	<p>Complete your own page about Owls – use the information you have read and watched to write your page. You can always do some of your own research on the internet or from a book. Use the sound mats below to help (you can also find these on the home learning page)</p> <p>Challenge: Can you use at least 5 key words in your writing. Underline these in your writing.</p>

	sentences.		
Maths	<p>One more one less Play a game with your adult or older brother or sister. Think of a number 0-20. Your adult or brother/ sister then asks is it one more than/ one less than to try and guess it!</p> <p>In your home learning book, copy the numbers and find 1 less and then draw it.</p> <p>Extension: True or false, can you say if it really is 1 less? See sheet below.</p>	<p>One more one less Play a game with your adult or older brother or sister. Think of a number 0-50. Your adult or brother/ sister then asks is it one more than/ one less than to try and guess it!</p> <p>In your home learning book, use the sheet below to find 1 more/ 1 less. Can you find 1 more and 1 less? Use the tens frames and number lines to help you.</p> <p>Extension: True or false?</p>	<p>One more one less Play a game with your adult or older brother or sister. Think of a number 0-50. Your adult or brother/ sister then asks is it one more than/ one less than to try and guess it!</p> <p>Can you find 1 more then 1 more again? Copy the problems below into your book and solve the problems e.g. 29 and 1 more = ____, 29 and 1 more and 1 more again = ____.</p> <p>Can you solve the problems in the extension?</p>
Phonics/ Reading	<p>Log in to https://www.phonicsplay.co.uk/member-only/MatchingPh2Wk4.html and practise reading words.</p>	<p>Log in to https://www.phonicsplay.co.uk/member-only/TrainYourBrainPh4.html and practise reading tricky words (common exception words).</p>	<p>Log in to https://www.phonicsplay.co.uk/member-only/PlanetaryPlurals.html and practise adding plurals to words.</p>
	<p>Please follow the link below to access online reading books. Go to https://www.oxfordowl.co.uk/api/digital_books/1345.html And read or listen to Painting the loft Remember its free to sign up and access Oxford Owls</p>		
Other	<p>Today's subject focus will be Art Can you draw a picture of your grown up? (or you could paint it) Think about what colour eyes, hair etc.</p>		

Unless otherwise specified , please complete the tasks in either your home learning book or on a word document.


a 	b 	c 	d 	e 	f 	g 
h 	i 	j 	k 	l 	m 	n 
o 	p 	q 	r 	s 	t 	u 
v 	w 	x 	y 	z 	Sound Mat 1	


Sound Mat 2

ng 	nk 	sh 	ch 	th 	ay 	ai 	ee 	ea 
igh 	ow 	oa 	oo 	oo 	ar 	or 	ou 	ow 
oi 	oy 	er 	ir 	ur 	air 	ear 	ure 	qu 

Challenge 1 English:









Challenge 1 Extension

What can he see?



Publilix a/2021 a/2021 a/2021 a/2021

Is this what he saw? Use your imagination and write a sentence.



Publilix a/2021 a/2021 a/2021 a/2021



Publilix a/2021 a/2021 a/2021 a/2021

First I saw





Owls

There are five types of owls that are commonly seen in in Britain. They are the barn owl, tawny owl, the long eared and short eared owls and the little owl. They hunt at night for food, which includes mice, voles and frogs. They have a very good sense of hearing.





Challenge 1 Maths:

		Number	Draw it
5	one less		
10	one less		
2	one less	1	
8	one less		
3	one less		

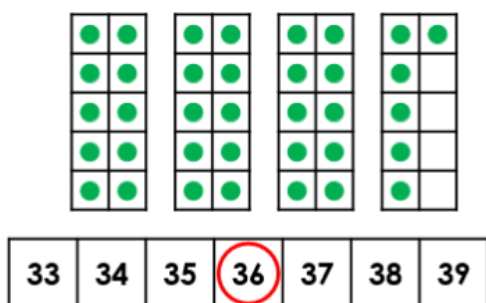
Challenge 1 extension:

True or false?

- a 3 is one less than 4. _____
- b 9 is one less than 8. _____
- c 0 is one less than 1. _____
- d 5 is one less than 4. _____

Challenge 2 Maths:

2a. Find one more and one less than the number shown below.



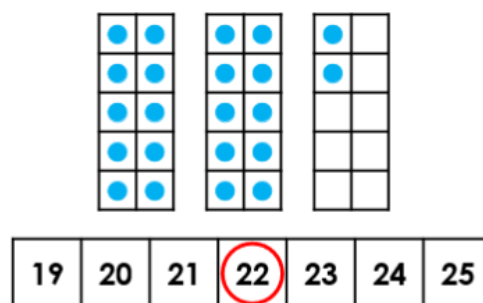
One more is .



One less is .

VF

2b. Find one more and one less than the number shown below.



One more is .



One less is .

VF

4a. Use the number track to complete the sentence.



44 is one less than .

VF

4b. Use the number track to complete the sentence.



27 is one more than .

VF

Challenge 2 extension:

True or false?

20 is 1 less than 21

13 is 1 less than 12

20 is 1 less than 18

32 is 1 less than 33

40 is 1 less than 39

Challenge 3 Maths

2a. Find one more and one more again than twenty-nine.

28	29	30	31	32	33	34
----	----	----	----	----	----	----

One more is .

One more again is .



VF

2b. Find one less and one less again than thirty-one.

28	29	30	31	32	33	34
----	----	----	----	----	----	----

One less is .

One less again is .



V

Challenge 3 extension:

1a. Which statement is incorrect?



Oscar

One more and one more again than 41 is 43.

One more and one more again than 41 is 45.



Tess

39	40	41	42	43	44
----	----	----	----	----	----

1b. Which statement is incorrect?



Gus

One less and one less again than 25 is 22.

One less and one less again than 25 is 23.



Sasha

22	23	24	25	26	27
----	----	----	----	----	----