

Learning Lions

Please find today's learning tasks below.

The table below explains the tasks and you will find the resources underneath. Your child will know which challenge they usually access in each subject and which task will be appropriate for them.

Year group: 2 Date: 27.03.20			
English	Watch the clip on the link below to learn about conjunctions. https://www.youtube.com/watch?v=k2ug9xr0las&safe=active		
	Challenge 1	Challenge 2	Challenge 3
	Today you are going to do some sentence work linked to conjunctions. Conjunctions are words that we use to join parts of our sentences. See activity and challenge below.	Today you are going to do some sentence work linked to conjunctions. Conjunctions are words that we use to join parts of our sentences. See activity and challenge below.	Today you are going to do some sentence work linked to conjunctions. Conjunctions are words that we use to join parts of our sentences. See activity and challenge below.
Maths	Warm Up – follow this link to complete your maths warm up. http://www.wldps.com/gordons/Coins.swf Count the coins in the piggy bank and click on the total.		
	Challenge 1	Challenge 2	Challenge 3
	Complete the task today investigating numbers. If you can't print the activity sheet – copy out the clue and match it to the number in your book. Remember to complete your reasoning task.	Complete the task today investigating numbers. If you can't print the activity sheet – copy out the clue and match it to the number in your book. Remember to complete your reasoning task.	Complete the task today investigating numbers. If you can't print the activity sheet – copy out the clue and match it to the number in your book. Remember to complete your reasoning tasks.

Reading	Complete the 60 second read – see activity sheet below.
Phonics	Complete the ai sentences on the activity sheet below.
Other	Today's subject focus will be PE. Let's Move Friday! https://www.bbc.co.uk/teach/super movers/ks1-maths-counting-with-john-farnworth/zbct8xs https://www.bbc.co.uk/sport/av/super movers/42626760

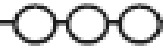
Unless otherwise specified, please complete the tasks in either your home learning book or print out the document below.



Co-ordinating Conjunctions

I can use a co-ordinating conjunction in my writing to join clauses.

I can choose the best conjunction for my sentence.



1. Look at the sentences below. The co-ordinating conjunction is missing. Can you choose the best conjunction to join the clauses? The first one has been done for you.

and

but

or

a) I wanted to go swimming but the swimming pool was closed.


b) I fell over _____ I bumped my head.

c) Would you like to go to the park _____ would you rather play on your bike?

d) I wanted to go to the beach _____ mum said we couldn't go.

e) I like to watch football _____ I can't play it.

f) I took my dog for a walk across the field _____ we both got muddy.



Copy and complete the sentences and then write 3 of your own sentences.

Using Different Types of Conjunction

L.O: To recognise and use different types of conjunctions.

Choose a **coordinating conjunction** from the box to complete these sentences.

and but or so

1. I went to bed very late _____ I am tired today.
2. I listened to the weather forecast _____ put an umbrella in my bag.
3. I enjoy playing hockey _____ it's not my favourite sport.
4. We could go to the park _____ to the cinema.

Choose a **subordinating conjunction** from the box to complete these sentences.

although because so that even if whenever

1. My dad has fixed my bike _____ I can take it to the park.
2. My brother is grumpy _____ he has got to do his homework.
3. I will always support my local team, _____ they always lose!
4. He goes abroad on holiday, _____ he doesn't like flying.

Choose a pair of **correlative conjunctions** from the box to complete these sentences.

whether/or either/or both/and not only/but

1. I'm not sure _____ I'm going to the match _____ not.
2. My mum is _____ a brilliant doctor, _____ she is a great runner too.
3. The weather is forecast to be _____ hot _____ humid.
4. We are having _____ pasta _____ curry for dinner.

Copy and complete the sentences.

Now choose 6 different conjunctions to complete your own sentences.

Using Different Types of Conjunction

LO: To recognise and use different types of conjunctions.

Choose the correct type of conjunction from the box to complete these sentences.

Coordinating Conjunctions

and but or so

Subordinating Conjunctions

although because so that even if whenever before even though until

Correlative Conjunctions

whether/or either/or both/and not only/but

Questions

1. I went to bed very late _____ I am tired today.
2. My dad has fixed my bike _____ I can take it to the park.
3. We are having _____ pasta _____ curry for dinner
4. I listened to the weather forecast _____ put an umbrella in my bag.
5. I will always support my local team, _____ they always lose!
6. The weather is forecast to be _____ hot _____ humid.
7. My brother is grumpy _____ he has got to do his homework.
8. He goes abroad on holiday, _____ he doesn't like flying.
9. My mum is _____ a brilliant doctor, _____ she is a great runner too.
10. I enjoy playing hockey _____ it's not my favourite sport.
11. We could go to the park _____ to the cinema.
12. I'm not sure _____ I'm going to the match _____ not.

Copy and complete the sentences.

Now choose 6 different conjunctions (2 of each) to complete your own sentences.

Maths Challenge 1

Gifts Galore!

Find the parcel number that matches each clue.
Then colour the parcels with the correct colour or pattern.



has 5 tens	red
smaller than 20 but bigger than 10	orange
in between 30 and 40	yellow
greater than 44 but less than 46	green
has no ones	blue
halfway between 70 and 80	purple
the smallest number	pink
has no tens	brown
the largest number	silver
has 3 ones	gold
a 3-digit number	stripy
more than 7 tens	spotty

Representing Numbers

Match the numbers to the correct representation.

ninety-six

30

thirteen

69

Can you use concrete materials to make the following numbers: 25, 37, 84, 72.

Challenge 1 Reasoning Task

Maths Challenge 2

Gifts Galore!

Find the parcel number that matches each clue.
Then colour the parcels with the correct colour or pattern.

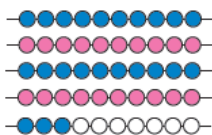
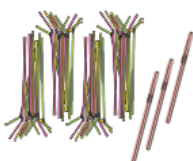
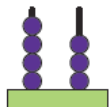





halfway between 60 and 70	red
same number of hundreds and ones	orange
the first 2-digit number	yellow
the smallest number	green
same number of tens and ones	blue
has no tens or ones	purple
the smallest 3-digit number	pink
has 4 ones	brown
less than 90 but more than 80	silver
one less than 30	gold
nearly 40	stripy
less than 36 but more than 34	spotty

Representing Numbers



Which of these images is the odd one out?



Can you explain why?
Can you find different ways to represent this number?

Challenge 2 Reasoning

Maths Challenge 3

Gifts Galore!

Find the parcel number that matches each clue.
Then colour the parcels with the correct colour or pattern.



less than 100 but greater than 90	red
less than 50 but greater than 40	orange
3 hundreds	yellow
has no tens	green
the largest number	blue
halfway between 200 and 300	purple
has 5 tens	pink
the smallest 3-digit number	brown
halfway between 150 and 160	silver
the smallest number	gold
no ones	stripy
the largest 2-digit number	spotty

Challenge 3 Reasoning tasks

Representing Numbers

How many two-digit numbers can you make using the digit cards?

3 **0** **7**

What is the smallest number you can make?
Prove it using concrete materials!

What is the largest number you can make?
Prove it using concrete materials!

Representing Numbers

Which of these images is the odd one out?

Can you explain why?
Can you find different ways to represent this number?

60 second read.

Challenge 1 Read aloud with your adult.

Challenge 2 and 3 complete independently and then share with your adult.

What Plants Need to Grow

6 To grow properly, a plant needs:

7 • air;

8 • light;

9 • water;

10 • nutrients;

11 • warmth.



16 Why does it need them?

27 • If a seed is not warm enough, it will not germinate.

35 Germination is when the seed starts to sprout.

45 • If a plant does not have enough light, it will
56 grow to be tall and flimsy as it tries to search
63 for light. The plant will probably die.

74 • If a plant is not watered enough, its stem will be
85 fragile and it will have very dry leaves. Again, it will
88 probably not survive.

99 So, where is the best place to grow a healthy plant?

Quick Questions



1. What do you think would happen if you planted a seed and put it into a cold, dark cupboard?



2. What is germination?



3. Find and copy the word that means the same as the adjective 'delicate'.




4. Where would be the best place to grow a healthy plant?

Phonics

Date _____

Choose the correct **ai** word and then complete the sentence.



raining

plain

tail

paid

pain

fail

bait

drain

1. I like to eat _____ toast.
2. A rabbit has a small, fluffy _____.
3. I _____ for my ice-cream.
4. Try again if at first you _____.
5. The water went down the _____.
6. The _____ is smelly.
7. I have a _____ in my back.
8. Is it _____ again today?

Copy and complete the sentences in your book choosing the correct ai word.