

Please find today's learning tasks below.

Year group: 3		Date:	
	Challenge 1	Challenge 2	Challenge 3
English	<p>Watch this video from 1 minute 40 to 2 minutes 20 and then write a retell using the images below.</p> <p>https://www.literacyshed.com/ta-kingflight.html</p> <p>Try to include:</p> <p>2A</p> <p>and, but, when</p> <p>Sentence opener</p> <p>Joined writing</p>	<p>To write a recount of the second half (from slide 13) of Hansel and Gretel. Re read the power point.</p> <p>Try to include:</p> <p>Sentence openers</p> <p>Expanded noun phrase</p> <p>Powerful verbs</p>	<p>To write a recount of the second half (from slide 13) of Hansel and Gretel. Re read the power point.</p> <p>Try to include:</p> <p>Sentence openers</p> <p>A range of sentences.</p> <p>Powerful verbs</p>
Maths	<p>A) Can you add tens and ones for addition?</p> <p>B) Practice your times tables on hit the button.</p> <p>https://www.topmarks.co.uk/maths-games/hit-the-button</p>	<p>A) Can you place the numbers on the number line?</p> <p>B) Practice your times tables on hit the button.</p> <p>https://www.topmarks.co.uk/maths-games/hit-the-button</p>	<p>A) Can you place the numbers on the number line?</p> <p>B) Practice your times tables on hit the button.</p> <p>https://www.topmarks.co.uk/maths-games/hit-the-button</p>
Reading/ spelling	<p>Please read 2 pages of your book and record in your home school links books.</p> <p>Spellings - Can you write the common exception given?</p>	<p>Please read 2 pages of your book and record in your home school links books.</p> <p>Spellings - Can you unjumble the year 3 spellings given?</p>	<p>Please read 2 pages of your book and record in your home school links books.</p> <p>Spellings - Can you unjumble the year 3 spellings given?</p>
Other	<p>PHSRE- Let's kick these germs into shape. Can you make a rap (writing it in your home learning book first) about how to stay safe and say 'I don't think so!' to these germs. It needs to be at least 8 lines long. Once you've write it video yourself rapping it and email it your teacher</p> <p>Why not look at this youtube video for some inspiration</p> <p>https://www.youtube.com/watch?v=g3Rf5qDuq7M</p>		

Challenge 1 English - to write a retell









Spellings challenge 1 - Can you look at each spelling, cover it up and practice writing each word 3 times each?

Spelling	Write	Write	write
that			
was			
because			
Where			
become			

Spellings - challenge 2 and 3

Can you unjumble these spellings from the year 3 spelling list?

seribedc

wdraofr

hgtnel

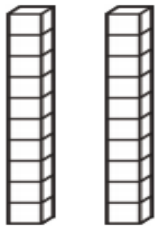

hagltuoh

laiceps

challenge | Maths

Complete the sentences to describe each number.

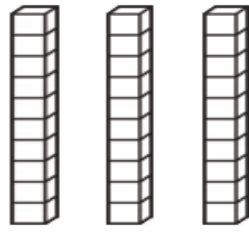
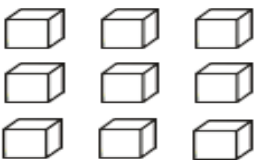
- a) 39 has tens and ones.
- b) 70 has tens and ones.
- c) 12 has ten and ones.
- d) 56 has tens and ones.

	
tens	ones

Complete the number sentences to describe each number.

The first one has been done for you.

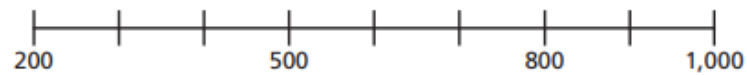
- a) $39 = 30 + 9$ c) $12 = \square + \square$
- b) $70 = \square + \square$ d) $56 = \square + \square$

	
tens	ones

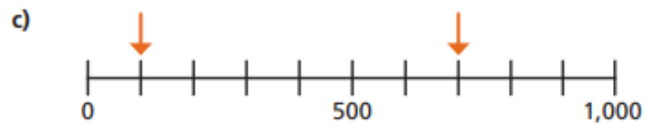
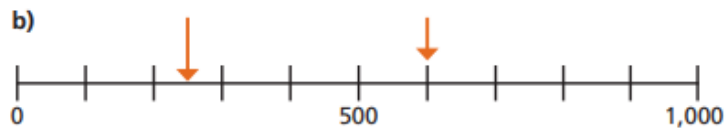
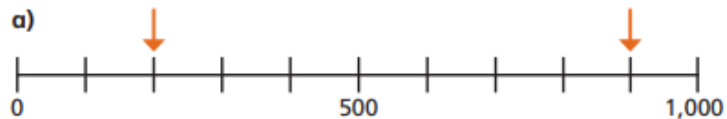
Challenge 2 Maths

Number line to 1,000

1 Complete the number line.



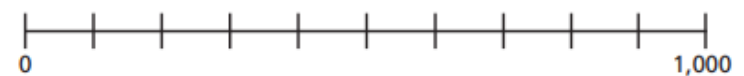
2 What numbers are the arrows pointing to?



3 Write these numbers on the number line.

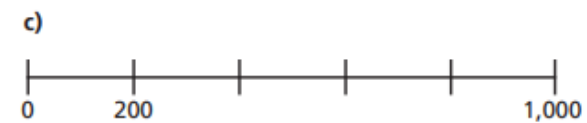
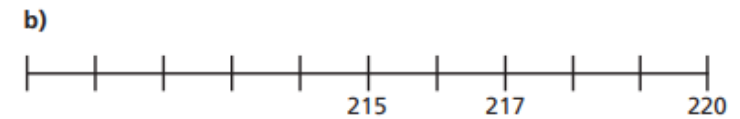
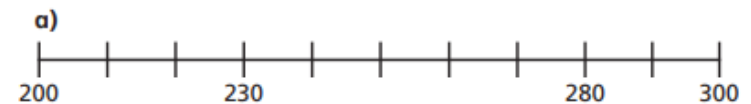
400 150 600 990

4 Here is a number line from 0 to 1,000



Label 500 and 750 on the number line.

5 Complete the number lines.

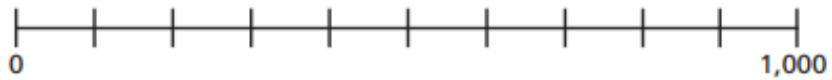


6 a) Label 470 on the number line.



Challenge 3 Maths

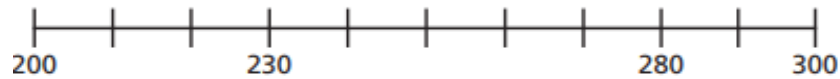
Here is a number line from 0 to 1,000



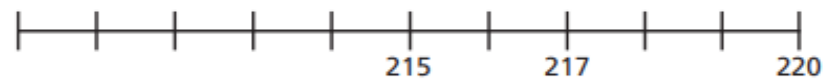
Label 500 and 750 on the number line.

Complete the number lines.

a)



b)



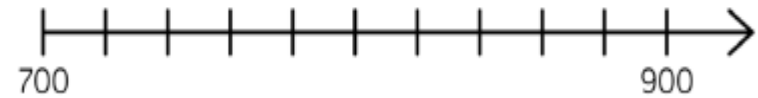
c)



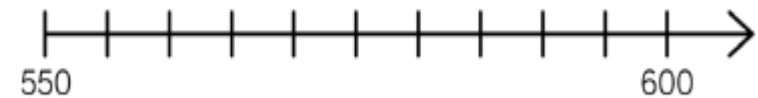
a) Label 470 on the number line.



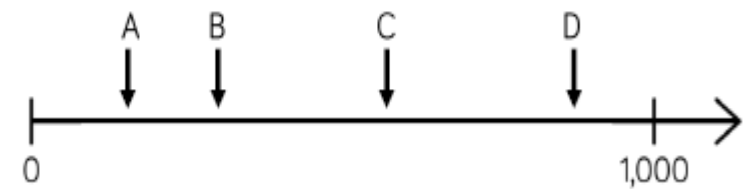
Draw an arrow to show the number 800



Draw an arrow to show the number 560



Which letter is closest to 250?



Estimate the value of A.



