

Please find today's learning tasks below.

The table below explains the tasks and you will find the resources underneath. Work can be completed in homework books.

Year group: 3		Date: 23.3.20	
	Challenge 1	Challenge 2	Challenge 3
English	<p>To write a description on the image below.</p> <p>Try to include:</p> <p>2A</p> <p>and, but, when</p> <p>Sentence opener</p> <p>Joined writing</p>	<p>To write a setting description on the image given below.</p> <p>Try to include:</p> <p>Adventurous adjectives.</p> <p>Sentence openers</p> <p>Expanded noun phrase</p>	<p>To write a setting description on the image given below.</p> <p>Try to include:</p> <p>Adventurous adjectives.</p> <p>Similes</p> <p>Expanded noun phrase</p>
Maths	<p>A) Draw the coins from the smallest value to the highest value.</p> <p>B) go on ttrackstars and practice your times tables.</p>	<p>A) Can you compare these numbers by completing a range of questions.</p> <p>B) go on ttrackstars and practice your times tables.</p>	<p>A) Complete the range of questions to compare numbers.</p> <p>B) go on ttrackstars and practice your times tables.</p>
Reading/ Spellings	<p>Please read 2 pages of your book and record in your home school links books.</p> <p>Can you write the common exception words given 3 times? (see table on next pages)</p>	<p>Please read 2 pages of your book and record in your home school links books.</p> <p>Can you write the year 3 words given 3 times? (see table on next pages)</p>	<p>Please read 2 pages of your book and record in your home school links books.</p> <p>Can you write the year 3 words given 3 times? (see table on next pages)</p>
Other	<p>Science - Can you draw what you think a human skeleton looks like. Don't worry if you don't know have a feel of your own bones.</p> <p>When you have completed this go onto Education City (please see login at the back of your home links book) and find out about our human skeleton.</p>		

Challenge 1 spellings

<u>Spelling</u>	<u>Write</u>	<u>Write</u>	<u>Write</u>
house			
school			
friend			
children			
they			

Challenge 2 and 3 spellings

Spellings	Write	Write	Write
enough			
important			
favourite			
surprise			
grammar			
describe			
difficult			

Challenge one English




Challenge 2 and 3 English

Can you write a setting description?

Try including:

- Adventurous adjectives
- Prepositions
- Sentence openers





Challenge 1 Maths

--	--	--	--	--	--	--	--

Smallest value

Largest value



visit [twinkl.com](https://www.twinkl.com)



[twinkl.com](https://www.twinkl.com)



[twinkl.com](https://www.twinkl.com)



[twinkl.com](https://www.twinkl.com)



[twinkl.com](https://www.twinkl.com)



[twinkl.com](https://www.twinkl.com)



[twinkl.com](https://www.twinkl.com)



[twinkl.com](https://www.twinkl.com)

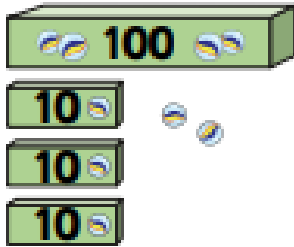




[twinkl.com](https://www.twinkl.com)


Activate Windows

Challenge 2 Maths


- 1 Who has the greatest number of marbles?

Mo	Tommy	Dora
		


- 2 Which is the smallest number: A, B or C?



A



B




C

- 3 Which is the greatest number in each list?

- a) 250 400 130 290
- b) 315 390 326 305
- c) 718 712 710 719 716
- d) 435 348 438 84

Challenge 3 Maths

-  Circle the greatest number in each pair.

Nine hundred and two 920


500 and 63 568

7 hundreds and 6 ones 76 tens

-  Use $<$, $>$ or $=$ to make the statements correct.

399 501

800 80 tens

-  Complete the statements.

$600 + 70 + 4 > 600 + \underline{\hspace{2cm}} + 4$

Two hundred and five $< \underline{\hspace{2cm}}$

Amir has 3 jars of sweets.



Jar A contains 235 sweets.

Jar C contains 175 sweets.



Jar A has the most sweets in.
Jar C has the least sweets in.

How many sweets could be in jar B?
Explain how you know.

